

273/1
GEOGRAPHY
Paper 1
November 2023
2¹/₂ hours



WAKISSHA JOINT EXAMINATIONS

End of Year Assessment

SENIOR THREE

Geography Paper 1

2 hours 30 minutes

INSTRUCTIONS TO LEARNERS:

- This paper consists of two parts, **I** and **II**.
- **Part I** and Section **A** of **part II** are compulsory.
- Attempt one item from section **B**.
- Responses to **part I** and Section **A** must be written in the spaces provided.
- An additional answer sheet may be given in case the space left for Section **B** is not enough.

(a) You are stationed at a borehole at grid reference 414654 facing northwards. You are then instructed to turn anticlockwise through an angle of 90° . Identify and write down.

(i) Any **four** features you will be facing. (4 scores)

.....
.....
.....
.....

(ii) In your opinion explain any **three** reasons why you think there is almost no settlement in the area along easting 34 between northing 63 and 64. (3 scores)

.....
.....
.....
.....


(b) The owner of the forested land South of Kibale wishes to sale that land to you. This is on condition that you establish to the owner the size of that land. Describe how you are going to find out the size of that land. (4 scores)

.....
.....
.....
.....

(c) The transport fee for a kilometer along a dry weather road is Shs. 1,500. You are supposed to travel from Kisomoka to Masindi. How much money will need for transport? (3 scores)

.....
.....

(d) You wish to describe diagrammatically the kind of land scape from Easting 40 to Easting 43 along Northing 64 to your friend. Draw an illustration describing such a land scape to your friend in the space provided. (6 scores)



- (e) Giving reasons for your answer, in your opinion identify five economic activities you can develop in the area of Ntoma. (5 scores)

.....

.....


.....

.....

.....

2. **PHOTOGRAPH INTERPRETATION (Compulsory)**

Study the photograph in figure 2 and do the tasks that follow.



- (a) (i) Identify the type of photograph in figure 2. (1 score)

.....

.....

- (ii) Give **five** reasons to support your answer in (i) above. (5 scores)

.....


.....

.....

.....

.....

(b) Draw a land scape sketch of the photograph in figure 2 and on it mark and name:



(i) **Two** physical features. (2 scores)

.....
.....

(ii) **Two** human features in the foreground. (2 scores)

.....
.....

(c) Giving reasons for your answer state any **three** problems likely to be facing the people living in the area of the photography. (3 scores)

.....
.....
.....

(d) (i) Explain any **three** measures that can be taken to solve the problem you have identified in (c) above. (3 scores)

.....
.....
.....

(ii) Explain with reasons any **two** factors that influenced the activity in the right foreground. (2 scores)

.....
.....

Turn Over

- (e) Giving reasons for your answer, suggest any **one** area in East Africa where this photography could have been taken. (2 scores)

.....
.....
.....

PART II

SECTION A – Compulsory

3. Read the text and answer questions that follow.

The global weather pattern has not been the same since about 1750. This was the beginning of the use of machinery instead of human labour in production of various products. By then, the global temperature had not started rising at alarming rates. To date, the rise in the world temperature is worrying. The caps and glaciers on mountains are becoming warmer. Scientist have huge amounts of data showing a clear pattern. The human beings have been found guilty of damaging the system that maintains life on Earth. All the effects of this phenomena are worrying. However, there are loads of things we can do to help. We just need to get everyone doing them.

- (a) (i) In your opinion, what is the text all about? (1 score)

.....
.....

- (ii) Identify the event in the text that accelerated the phenomena you have given in (a) (i) above. (1 score)

.....
.....

- (iii) Explain any **one** natural cause of the event you have given in (a) (i) (2 scores)

.....
.....

- (iv) In **two** words, give a name to the rapidly increasing world temperature. (2 scores)

.....
.....

- (b) Explain any **five** causes of the event in the text. (5 scores)

.....
.....
.....
.....
.....

- (c) Developing country's economies cannot ably withstand the effects of the phenomena in the text. It is advisable that such countries should learn to live with this phenomena. Explain any four ways how the developing countries can be able to live with the phenomena you identified in (a) (i) above. (4 scores)

.....

.....

.....

.....

4. Study figure 3 and answer the questions that follow.

Country	Export values (000)USD	Import values (000) USD
Kenya	483,227	485,610
Rwanda	226,726	12,577
Burundi	45,114	0
Tanzania	112,632	72,669
South Sudan	281,159	0

Figure 3. Uganda's trade with some East African Community member country.
Source: Uganda Bureau of statistics (2017)

- (a) Calculate Uganda's value of:
- (i) Export to the countries of the East African Community. (2 scores)

.....

.....

.....

.....

.....

- (ii) Imports from the countries of the East African Community. (2 scores)

.....

.....

.....

.....

.....

- (b) Classify the trade in the table in terms of favorable and unfavorable balance of payments. (5 scores)

Turn Over

Favorable

Unfavorable

.....
.....
.....
.....
.....

.....
.....
.....
.....
.....

- (c) Explain why you think Uganda had a favorable balance of payments in her trade in 2017 with the East African Community member countries. (2 scores)

.....
.....
.....

- (d) In your opinion, explain any four ways a country like Uganda can improve on her balance of payments. (4 scores)

.....
.....
.....
.....

5. East Africa countries have seen a major increase in tourist arrivals for both business and leisure purposes.

- (a) Explain for reasons for the rapid development of the tourist industry in East Africa. (4 scores)

.....
.....
.....
.....

- (b) How can the tourist industry be boosted further? (6 scores)

.....
.....
.....
.....
.....
.....

- (c) In your own opinion, explain the different ways how tourism benefits a country. (5 scores)

.....

.....

.....

.....

.....

.....

.....

.....


.....

.....

SECTION B – Extended essay response

Answer only **one** item from this section.

6. The National Association of Students of Uganda, has organized a conference for students of Uganda. The theme for conference is “beautiful mother Africa”. The conference is to be attended by the French Ambassador to Uganda. The ambassador will use this opportunity to select 50 students to be awarded scholarships to study from France.




Task:

You have been selected as one of the speaker at the conference. Prepare a speech of about 400 words that you will present at the conference.

(10 scores)

7. The climate of Africa in some parts has been so good that are luxuriant vegetation has developed. Such a vegetation has a variety of tree species and world game. This environment have affected the lives of people who live here differently. People elsewhere are wishing they chance to settle in such a place.



Task:

You have been given an opportunity to leave in such an area.
Write a plan of about 400 words on how you are going to economically benefit from this kind of environment.
(10 scores)

END