

HOME ACTIVITY

NAME.....

SECTION A

1. Add : $34+46=$

2. Write in words

234.....

78.....

453.....

98.....

56.....

124.....

345.....

171.....

69.....

111.....

3. Write in figures

Thirty-nine.....

Fifty eight.....

Two hundred seventy six.....

Five hundred eighty eight.....

One hundred nineteen.....

Six hundred sixty six.....

Seven hundred twenty five.....

Forty four.....

Eighty eight

Nine hundred ninety nine.....

4. Write the place value of each digit

345

567

456

789

267

907

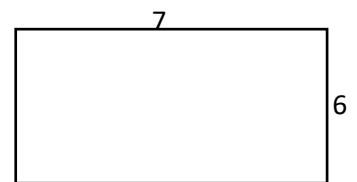
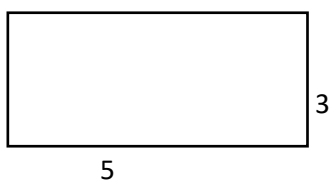
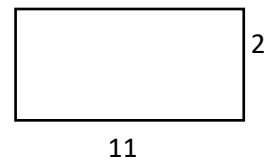
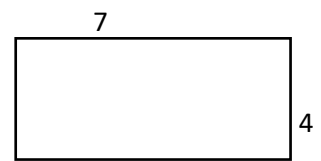
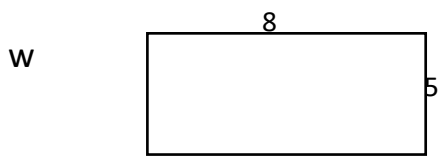
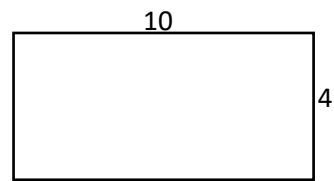
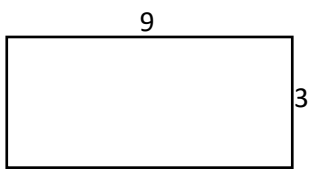
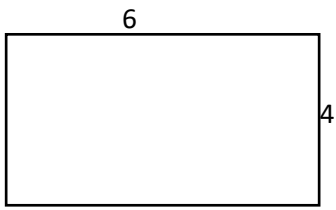
478

987

789

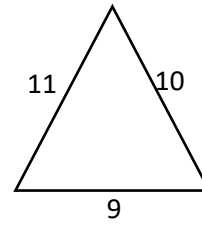
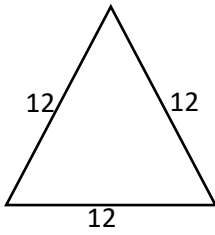
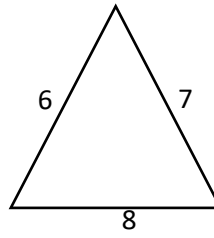
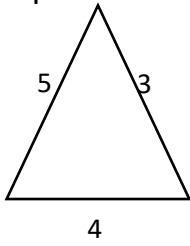
123

5. Find the perimeter of the rectangles below



Find the perimeter of the triangle below

n



Name the shapes below

Y

