

AITEL EXAMINATIONS BUREAU LIMITED

UGANDA CERTIFICATE OF LOWER CURRICULUM EDUCATION

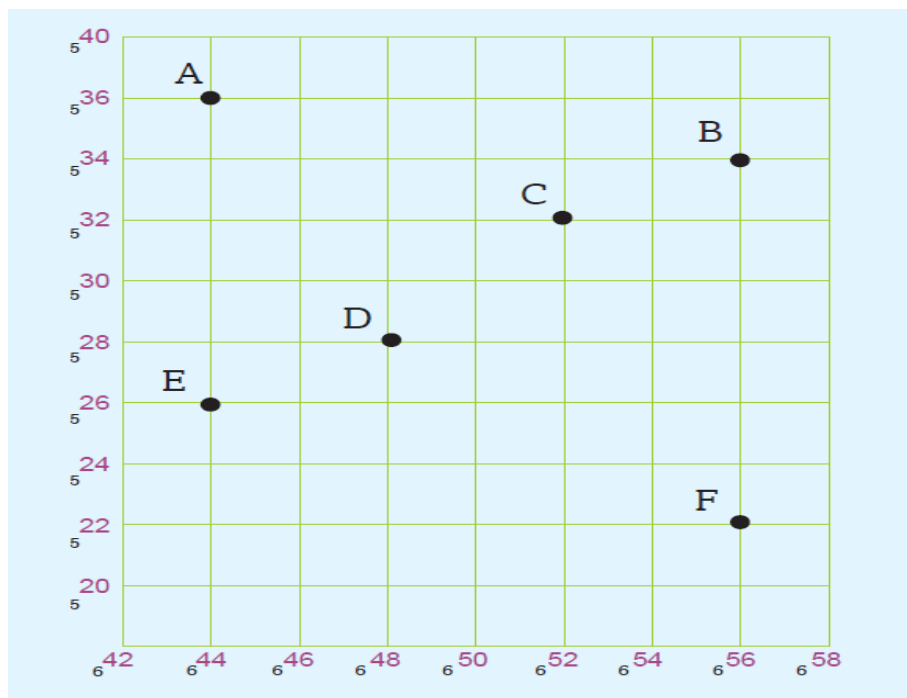
S2 END OF YEAR 2023

GEOGRAPHY

TIME: 1HR: 30MINS

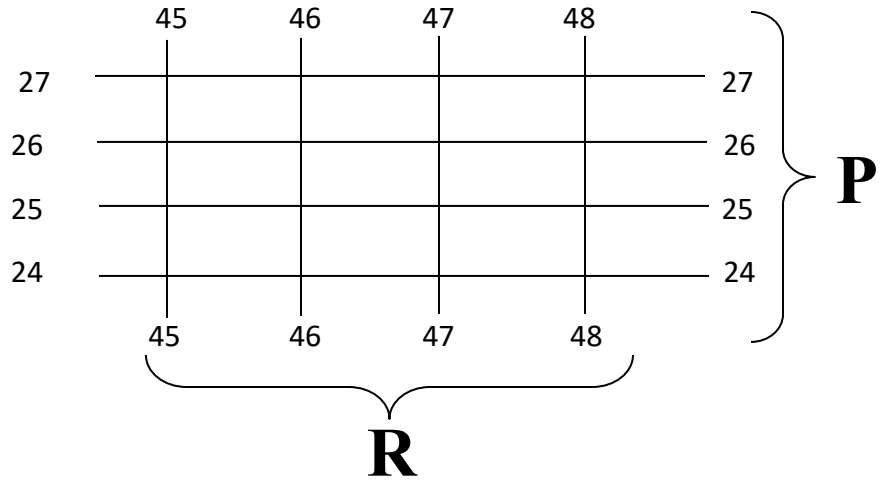
1a). Using the grid squares provided below;

- state the four figure grid reference of points **A** to **F** (6mks)
- Explain one advantage of using four- figure grid reference. (2mks)



b). Identify the lines as drawn below ;(2mks).

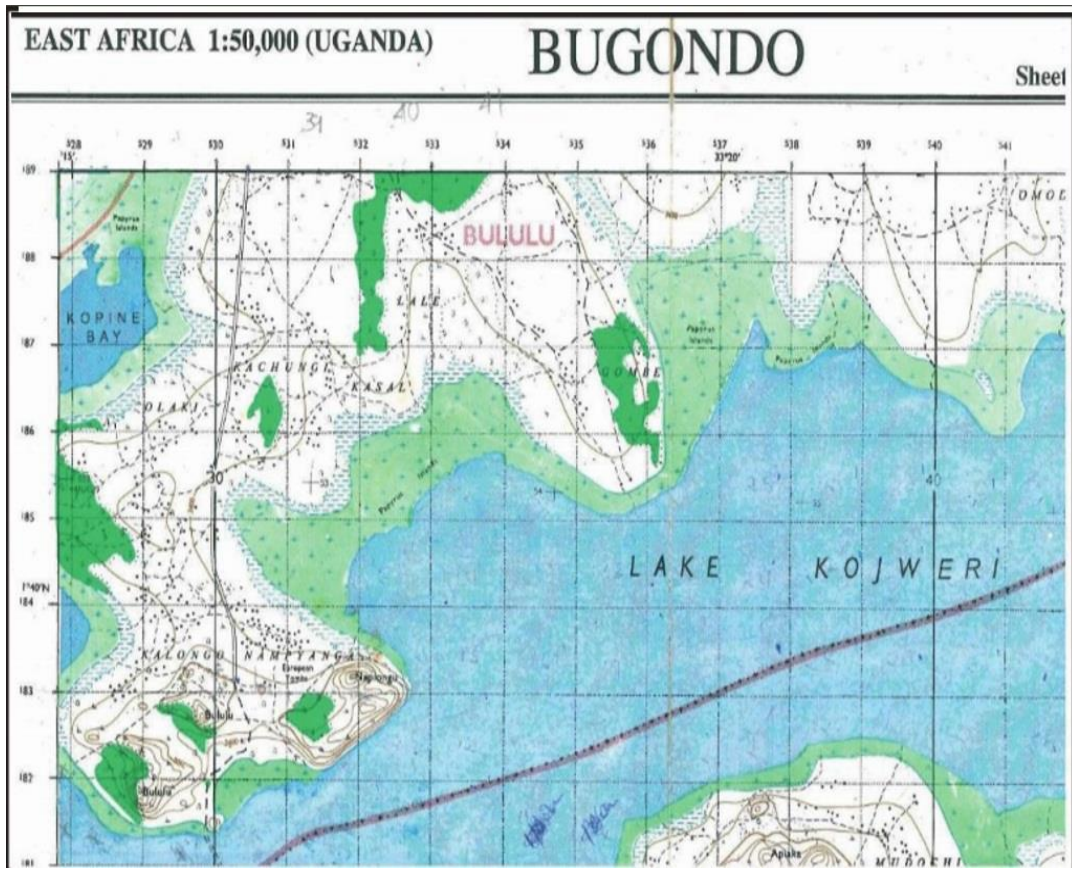
- i. P
- ii. R



- 2a). Explain what you understand by a map. (2mks)
- b). Explain the characteristics of a good map. (5mks)
- c). Give three differences between a map and a photograph. (3mks)

SECTION B

- 3). A map of **BUGONDO** (Part of Bugondo Survey map in East Africa **1:50, 0000**)



- a). Calculate the area covered by Lake Kojweri from easting 36 Eastwards in Kilometres (05mks)
 - b). Draw the compass rose on the map to have 8 points. (05mks)
- 4). Study the photographs below and answer the questions that follow.



- i. Define the term Fieldwork? (02mks)
- ii. Besides breaking classroom monotony, what is the importance of field work?(5mks)
- iii. Describe four methods of data collection during fieldwork study (4mks)
- iv. Choose one method and give its advantages and disadvantages.(4mks)

5a). Define weather? (01mk)

b). Identify the different weather conditions in each.(04mks)



