

SAAD ISLAMIC CENTER SECONDARY SCHOOL

END OF TERM 3

S.2 GEOGRAPHY

TIME ALLOWED 2HR:30MIN

INSTRUCTIONS

Do all numbers but number **one** answer in the space provided

SECTION A COMPULSORY

1a).The coastal plains lies between 0 – 250 m above sea level. Most parts of the coastal plain are narrower except in West Africa and coasts of Mozambique and East Africa. Coastlines are regular since they have few bays and capes. Africa’s coastline is characterized by beaches, sand pits, sand bars, and lagoons.

i)Apart from the above named relief regions list other four that are found in East Africa
4marks

.....
.....
.....
.....

ii) select one relief region in 1(ai) and describe six characteristics (3marks

.....
.....
.....
.....
.....
.....

b) Describe how sedimentary rocks where formed at the coast of East Africa basing on mechanical way (3marks

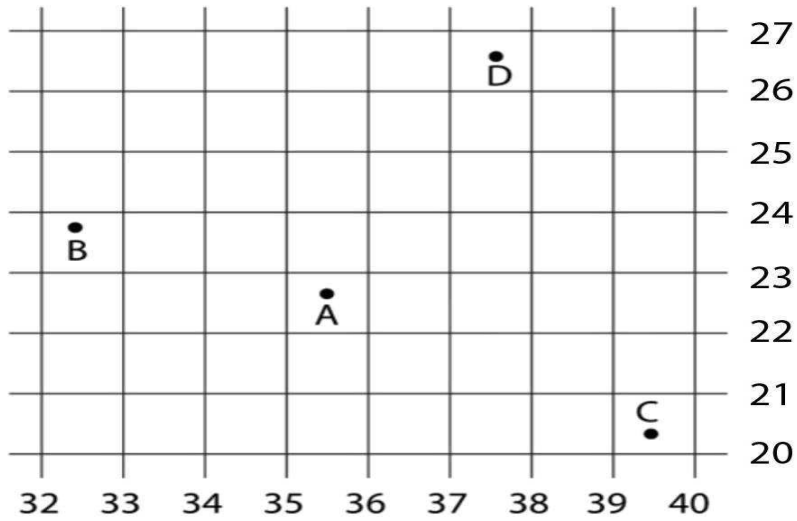


.....
.....


2. COMPULSORY QUESTION:MAP WORK

Study the grid below carefully and answer the questions that follow

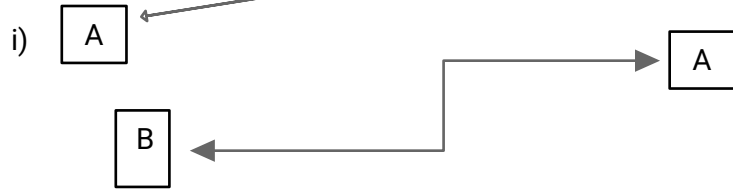
a) Write down both four and six grid reference of the A,B,C and D (8marks)



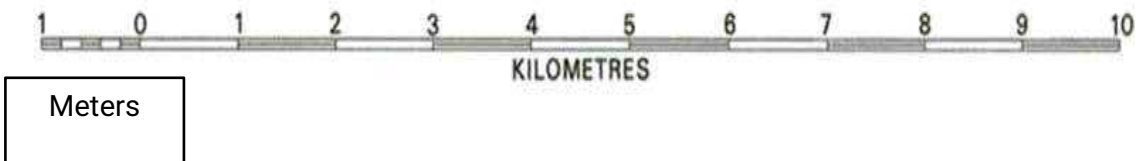
b) Calculate the are covered by Nabugabo swamp given above and your answer must be with correct SI unite (2marks)



c) Calculate the distance of the routes from point A to B using the linear scales given below (5marks)



ii)



3. COMPULSORY QUESTION: PHOTOGRAPHIC INTERPRETATION.

Study the photograph provided below and answer the questions that follow:



(a) Identify the activity taking place in the photograph. (1 mark)

(b) Giving evidence from the photograph, describe the factors which have favoured the economic activity identified in (a) above. (6 marks)

(c) Outline the:

- (i) benefits of the economic activity to the people living around this area. (4 marks)
- (ii) effects of the economic activity on the environment. (3 marks)
- (d) Suggest with evidence, one area in East Africa where the photograph could have been taken. (1 mark)

4. COMPULSORY QUESTION: FIELDWORK

For any one fieldwork study you have carried out on a fishing village or a market:

- (a) State the:
 - (i) topic of your study (2 marks)
 - (ii) objectives of your field work study.(3 marks)
- (b) Draw a sketch map of the area studied and on it mark and label (5 marks)
 - (i) physical features,
 - (ii) man-made features
- (c) Outline the conclusions you made from the field work study (3marks)
- (d) Explain the problems faced by the people living around the area of your field work study. (2 marks)

SECTION B (20marks)

5) Rock, in geology, naturally occurring and coherent aggregate of one or more minerals. Such aggregates constitute the basic unit of which the solid Earth is composed and typically form recognizable

- ai) Basing on that assumption list down three categories of rocks (3marks)
- ii) Describe the process that have led to the formation of igneous rocks in East Africa. With a clear drawing indicating intrusive and extrusive igneous (5marks)
- b) Explain the relative importance of rocks to the East Africans (7marks)
- c) What are the negative results of rocks towards East Africa (5marks)

