



SHAPTA JOINT ASSESSMENT BOARD 2024

Uganda Certificate of Education

ENGLISH HOLIDAY PACKAGE

SECTION A

1A. Read the text below and answer the question after it.

A library refers to a collection of books. Some people have just a couple of books in their bookshelves, which they describe as personal or home libraries. This is understandable in the general context that a library is a collection of books. In specific terms, a structure qualifies as a library only when it has a minimum of 500 text books, not less than that. An ordinary library has the following sections: Open shelves section, short loan (book loan) section and reference loan.

The open shelves section is meant for all authorized library users. Users can access books for books for reading during prep. Most texts here concern the main subject areas. Books from open shelves can be lent out for a maximum of two weeks. The short loan section contains rare books of those that are in short supply but on high demand. Borrowing is done overnight, in the evening or for two hours during the day. Anyone who overstays with a resource material is surcharged.

The reference section contains books used for reference only. Such as dictionaries, atlases, encyclopedias, etc. Books in this section cannot be lent out of the library. A school library serves several functions. It is an important research place, a reference facility, a learning resource Centre for both learners and their instructors/ teachers, and a refreshment facility where individuals can read newspapers, periodicals or novels as a pastime.

There should be a clear policy about how the library ought to be used in a given environment. The librarian should work out a reading schedule to accommodate all interest groups (all those who wish to use it at any time) and ensure there are guidelines in place so that the facility does not close down (there should be a librarian who should design a lending/borrowing policy). He/she should also make the knowledge acquisition processes easy and less cumbersome for users (the library is a friend of learners and teachers). The librarian should also establish rapport

SECTION B

2. You have organized a birthday party where you invite your friends and family. One of your friends lacks table manners and etiquette and he or she embarrasses you.

Write an essay of (100 -300 words) that you would present for an essay competition about behaving politely, courteously and respectfully during meal time. Use language of table manners and etiquette, verbs of preference and expression of likes and dislikes.





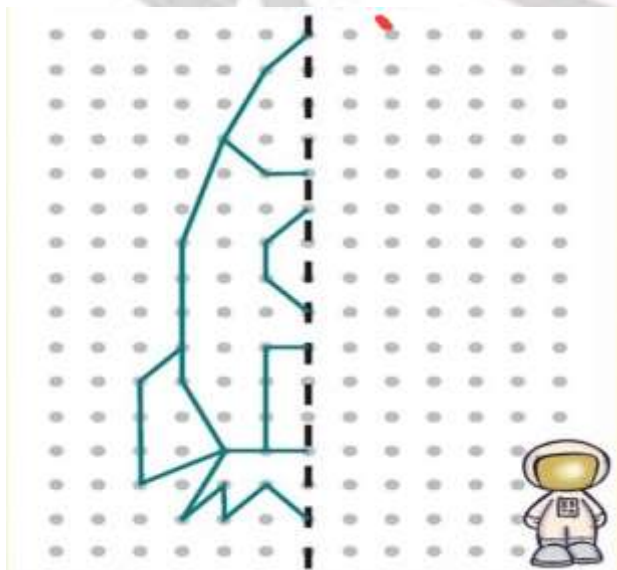
SHAPTA JOINT ASSESSMENT BOARD 2024

Uganda Certificate of Education

MATHEMATICS HOLIDAY PACKAGE

Item 1

You were asked to draw a symmetrical picture in groups of two by your art teacher. Your group member finished her part as follows:



TASK:

a) Complete the teacher's assignment.

Item 2

Your classmates are arguing whether to produce Sausages(S), or Popcorns (P), or cakes(C) or daddies (D) for the school project. To solve the argument, **your class teacher assigned you as the group manager to make research and present the findings on a diagram** and hence use it to decide. You questioned a group of 40 students from different classes of which product they prefer and below were there responses:

S	C	S	P	P	S	D	P	S	C
P	P	S	P	D	C	S	D	P	S
P	S	P	S	C	P	S	P	S	P
D	C	S	S	S	P	S	S	D	S

TASK:

a) Fulfill the teacher's assignment.

b) Which product do you think you and your fellow students will end up producing?

Item 3

On your way to school from home, you plan to pass via your friend's home to pick your book.

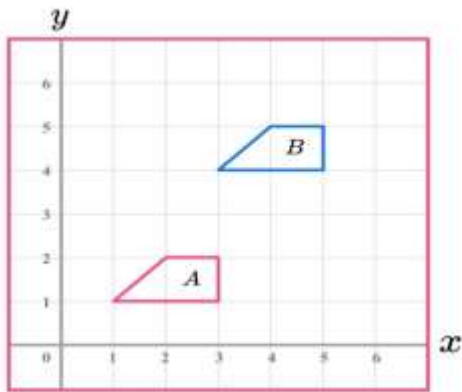
You travel by a motorcycle that travels at constant speed of **88km/hr**.

You want to decide on what time to leave home such that you reach school at **7:30am**.

On a grid map where each square is 1km , your home is located at coordinate (3, 3), your friend's home is at (2, 9) and your school at (7, 9).

As you were thinking of how to travel, you realized that your painting was shifted from position B to position A as shown below and hence would wish to shift it back.

B.



NOTE: Time in hours = $\frac{\text{distance in km}}{\text{speed in km/hr}}$

TASK:

- What time will you have to leave home for you to reach school on time?
- How will you shift you painting back to its original position?

SHAPTA

END



SHAPTA JOINT ASSESSMENT BOARD 2024

Uganda Certificate of Education

BIOLOGY HOLIDAY PACKAGE

Item 1

Last week, Louise went in the village with his aunt to spend a weekend. While there, in the early morning, the relatives could wake up in the garden and Louise and the aunt could remain at home with one of the young sister called Nakafeero to prepare breakfast. After finishing breakfast he decided to move around the area following where other members went for digging, on his way he came across different soil types but he could not distinguish them properly. Near the swamp, there was sticky and grey soil with a lot of water in it, around the rubbish pit, there was reddish brown soil with some earthworms coming out of it, when he approached the valley, there was dry soil with large soil particles. He decided to collect all the soil samples and brought them in the garden where other members were digging from.

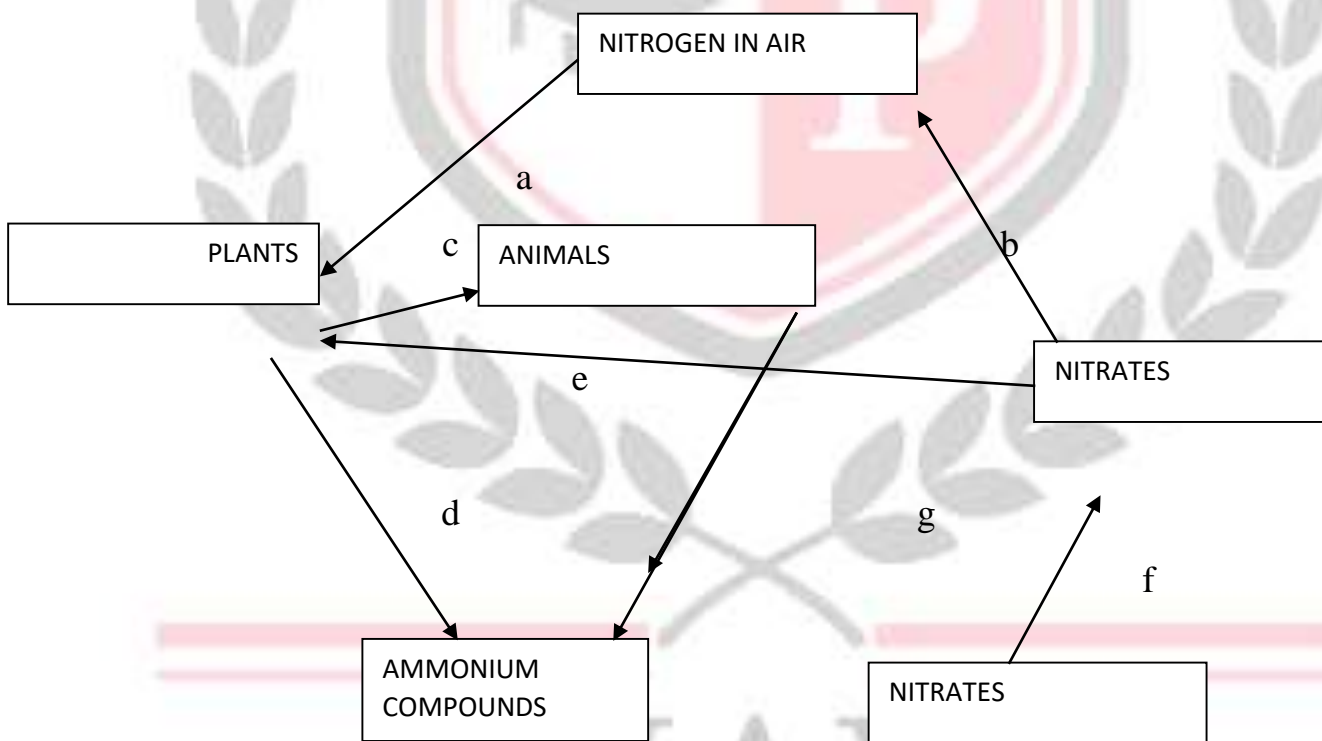
TASK.

Help Louise to distinguish the different soil samples and explain him learn more about the different components of soil and their properties according to his picked samples.

Item 2

A senior one learner came to your class carrying a biology chart and he was saying that he could not understand the things written on the chart but he was able to read the word NITROGEN CYCLE as the title. There were different arrows pointing at some words which he totally didn't understand, the chart is shown below.

NITROGEN CYCLE



TASK

Help him to find out the named arrow on the chart and explain him more about the different processes on the nitrogen cycle as indicated by the arrows. (10 scores)

Item 3

In Bududa district, the area receives heavy rainfall and it is found on a steep slope. Members of the village always complain about the poor weather condition that keeps on destroying their crops and also faces challenges in taking back their children at school due to the poor condition of the roads. During the village meeting, one of the members raised his hand and talked about soil erosion as the major concern of all this, all members were wondering because of the word said by their fellow members which they didn't understand.

You have been called upon by the elders of the village to explain more about the said word since you are one of their educated children in the village.

TASK.

Explain the members the meaning of soil erosion and brief them more about the different types of soil erosion and their causes.

Item 4

Precious a senior two learner carried out an investigation to determine the percentage of air in a given soil sample and obtained the following values;

Volume of soil used = 40cm^3

Volume of water added to soil = 50cm^3

Final volume of water + soil after mixing = 80cm^3

- a) Determine the volume of air in the soil sample.
- b) Calculate the percentage of air in the soil sample.

In another investigation, 80g of a fresh soil sample was heated in a crucible.

After repeated heating and cooling, the constant mass of the soil was found to be 65g. Calculate the percentage of water in the soil sample and explain the factors that affect the water content of a given soil.

Item 5

Akello left food uncovered on the veranda during lunch time. On her return, she found houseflies all over the plate. She chased away the houseflies and ate the food. After a few days, she fell sick and had to spend some days away from school. What do you think caused her sickness? With reasons, advise her on what she can do to avoid suffering from sickness again.



END



SHAPTA JOINT ASSESSMENT BOARD 2024

Uganda Certificate of Education

CHEMISTRY HOLIDAY PACKAGE

Item 1

You were sent to the shop to buy a rope for straining some domestic animals. She was not told to purchase a specific rope, but knew about some properties of some common ropes. At the shop, she found two kinds of ropes; **Manilla fibre**, which is made from plants and **Poly-propene** made from some substances in oil. The table below shows some of the physical properties of the two materials used to make the ropes.

Material	Durability	Breaking strength for 10 mm long rope	Flexibility
Manila fibre	Rots slowly	5400	Very flexible
Poly-propene	Does not rot at all	10,800	Very flexible

- a) Which one of the two ropes would you advice the girl to buy? Give a reason for your answer

.....
.....

.....
.....
b) State any two advantages

(i) of poly-propene ropes over manila ropes

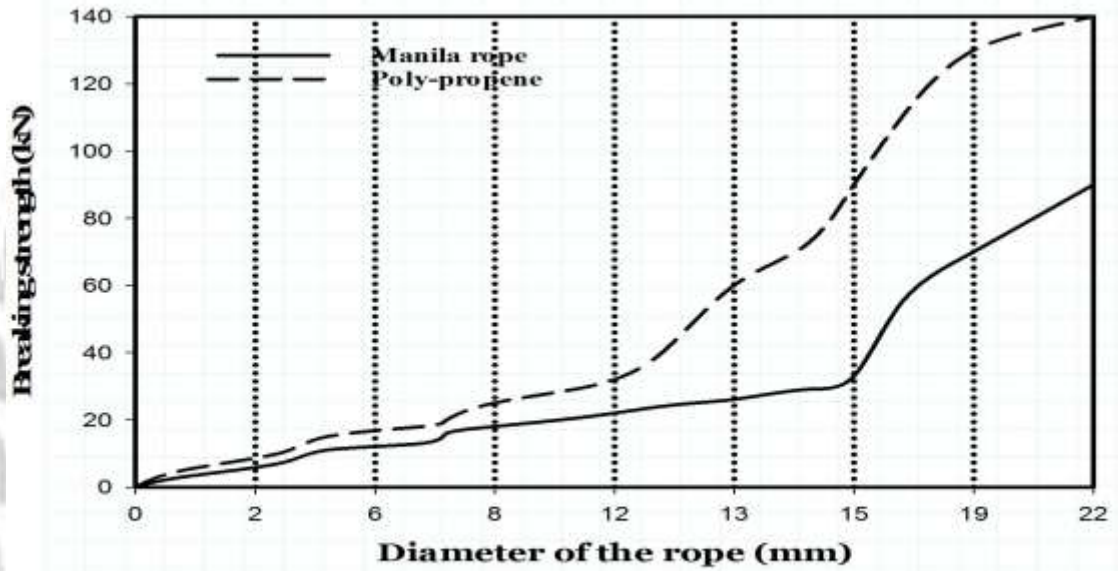
.....
.....
.....

(ii) manila ropes over poly-propene ropes

.....
.....
.....

c) The graph below shows how the strength of Manilla and Poly-propene ropes changes as rope diameter increases

The page features a large, faint watermark of the SHAPTA logo. The logo consists of a shield divided into four quadrants: top-left (red with white 'H'), top-right (white with red 'A'), bottom-left (white with red graduation cap), and bottom-right (red with white 'P'). The shield is flanked by laurel branches and sits above the word 'SHAPTA' in a large, bold, serif font. The entire logo is set against a background of horizontal stripes in red, white, and blue.



i) Using your graph, find the Breaking strength of the manila and Poly-propene at the diameter of 15 mm

.....

.....

.....

ii) State any two disadvantages of the material from which poly-propene is made in the environment

.....

.....

.....

.....

.....

.....

.....

.....

.....

.....

Item 2

2.a) Give two properties shown by:

(i) a solid

(ii) a liquid

(iii) a gas

b) In the boxes below, draw the diagrams to show the arrangements of particles in each of the states of matter (03 scores)



SOLID



LIQUID



GAS

c) Use the particle theory of matter to explain the following:

i) When a liquid like water is heated, it turns a gas (02 scores)

.....

.....

.....
.....
ii) When a solid is heated, it melts and turns into a liquid

Item 3

Water pollution is very common problem today. Water is such a very important substance in the life of all living things. Application of fertilizers is a one common way of polluting water

a) State other four ways in which water is polluted

i.

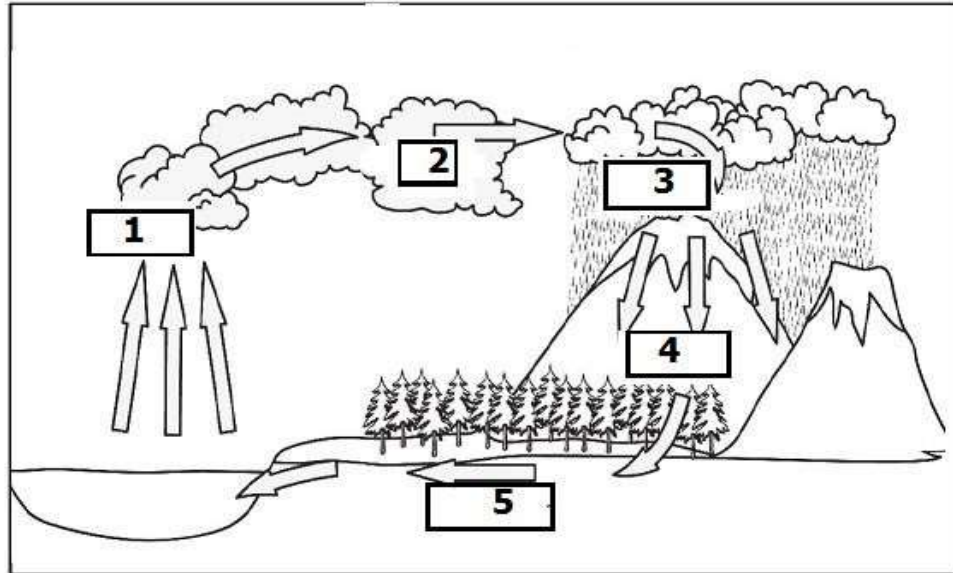
ii.

iii.

iv.

b) Name one nitrogen containing fertilizer that is always applied in agriculture, but can pollute water.

.....
.....
c) Below is a diagram showing the water cycle. Use it to answer the questions that follow



i) Identify the processes named 1, 2,3,4 and 5

1.

.....

2.

.....

3.

.....

4.

.....

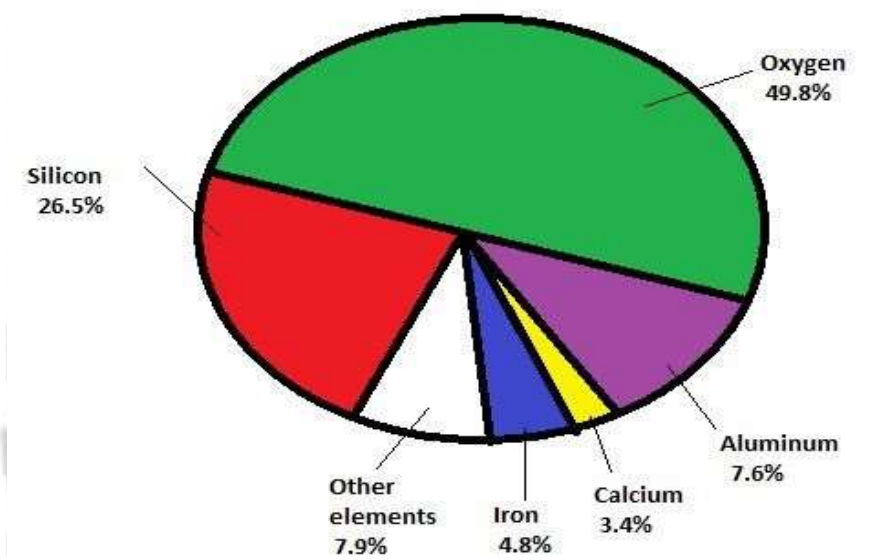
5.

.....

ii) State two ways in which process 3 can be enhanced in nature?

Item 4

The pie chart below shows the percentage by mass of the different elements that make up the different substances on the earth's crust

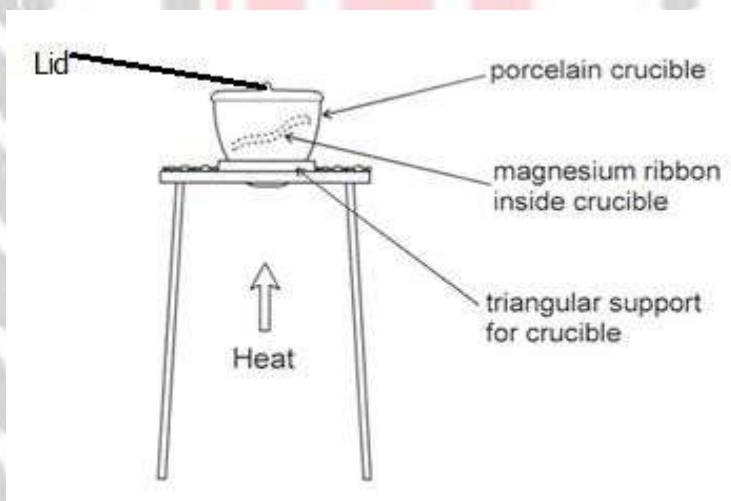


a) In the table below, write down the names and chemical symbols of six(6) elements on the earth's crust

(03 scores)

Name of element	Chemical symbol of the element

b) Isaac, a senior two learner, wanted to investigate mass changes when he burns a metal in air. He knows that a compound will be formed. He uses the following apparatus to investigate the mass change of magnesium when it burns in air to make a compound called magnesium oxide.



Isaac writes down the hazards of the investigation. Complete the table to show how he can control the risks from these risks.

Hazard	How to control risks from the hazards
Magnesium is highly flammable/can catch fire	
Burning magnesium has a very bright flame	

c) Isaac writes down his results as follow;

- *Mass of crucible + lid* = 32.00g
- *Mass of magnesium* = 0,24 g
- *Mass of crucible + lid + magnesium oxide* = 32.40g

i) Calculate the mass of magnesium oxide formed

.....

.....

.....
.....
ii) Calculate the mass of oxygen that combined or joined with magnesium in the experiment


.....
.....
.....
.....
d) Write a conclusion that can be given to Isaac's experiment?

Item 5

In chemistry, working with materials sometimes poses a great danger to the person handling. These are called hazards. In order to avoid these dangers, it is important to read and understand the labels given about the substance.

Complete the table below by indicating the meaning of the hazard symbols and two ways of reducing risks from the hazards (10 scores)

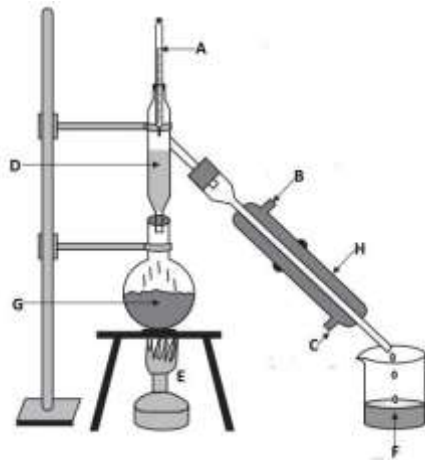
Hazard symbol	What it means	How to reduce the hazard
		



Item 6

The diagram on the right shows an apparatus used for separating some mixtures. The labels have been replaced with letters

SHAPTA



a) Name the parts labeled A-H in the diagram

- A.
- B.
- C.
- D.
- E.
- F.
- G.
- H.

b) Mention two mixtures that can be separated using the method in the diagram above

i)

.....

ii)

.....

Item 7

Chemistry is one of the most prestigious science subjects studied at the secondary level of Education. When you study chemistry, you not only acquire knowledge about many chemical reactions and other substances, but you can also take up various careers after school.

- (a) Identify any three careers that you can take up through studying chemistry.

.....

.....

.....

.....

.....

.....

- (b) Briefly describe how the knowledge of chemistry has been applied in the following field in the Ugandan economy;

- (i) Agriculture.

.....

.....

.....

- (ii) Medicine.

.....

.....

.....



(iii) Cosmetics industry.



SHAPTA JOINT ASSESSMENT BOARD 2024

Uganda Certificate of Education

PHYSICS HOLIDAY PACKAGE

Item 1

Assuming the senior one learners at your school are in the science laboratory conducting a physics practical with their physics facilitator, one of your group members sustained serious blisters on the hand. After successful handling and treatment of the causality, your Head teacher of your school identifies you to present to the entire school the guidelines of proper laboratory use.

TASK

Write a comprehensive report on which your presentation shall base, clearly indicating the possible dangers that can arise as a result of neglect of the given guidelines.

SHAPTA

Item 2

Joseph First filled one bowl with cold water, and then he just left them to settle for 5-10 minutes. Then he added just a small pin gently on the surface of the liquid in the bowl. He observed that the pin did not sink.

- a) Which process was joseph investigating?
- b) Discuss the possible ways how you can help joseph to make the pin to sink

Item 3

On the rainy day, one of your community members was struck by lightning and his body was having third degree skin burns and deep wounds. Most community members claimed it was witchcraft; maybe they are right or there maybe another better explanation to this scenario using knowledge of states of matter.

TASK:

- a) Explain to the community members what state of matter lightening is. Give three more examples of other substances that fall in the same state of matter as lightening?

Item 4

There is a parent project in your school to construct two rectangular pit latrines. One at the girls 'wing and another at the staff quarter's wing. However, the Board of Governors and the school administration have failed to agree on the choice of materials to use in construction.

TASK

- a) Using the knowledge and skills learnt in "mechanical properties of materials" Suggest the choice of materials you would advise the school board to use in the construction of the latrines

SHAPTA

END



SHAPTA JOINT ASSESSMENT BOARD 2024

Uganda Certificate of Education

AGRICULTURE HOLIDAY PACKAGE

Item 1

Recently 150 street children were captured on the street of Kampala by KCCA. Among them were children aged 18 years and above who even appear to be able to work for their living. They claim that's the only option they have for survival.

However, the government wants to introduce them to the field of Agriculture since it has got various opportunities/ occupations that would help them other than the street begging and stealing.

TASK

- a) What are some of those opportunities that would eliminate the cause and how would that benefit your community.
- b) Suggest what the government can initiate or do to involve these children in Agriculture production

Item 2

Kitandwe has been leaving in Asia for the last five years and has just returned back to his home village in Kakumiro where he has bought a piece of land. He intends to invest his savings in crop growing but not sure which type of particular crop this land can support.

TASK

As an Agriculture student, make a detailed write-up describing how you can help Kitandwe to investigate the type of crop his land can support and why you think it is important.

Item 3

Due to the increasing market for crops in Uganda, there is a need to increase in production and as result most farmers have resorted to use of agro- chemicals such as fertilizers and pesticides. In a survey that was carried out in 2011, it was discovered that most farmers are wrongly using these chemicals without following the necessary guidelines and as a result some farmers have fallen sick, others have lost their lives and the soils have also deteriorated in fertility.

TASK

You have been invited by one of the local television stations to give a speech concerning the matter, write a detailed speech reminding the farmers of the necessary guidelines they should put into consideration while using agro-chemicals.

Item 4

In management of their farms, farmers are encouraged to keep records. In fact in some countries, farm records are a legal requirement for all farms. Many Ugandan farmers however, are not in the habit of making farm records and many do not know how to properly make these records.

TASK

- (a) Suggest the potential benefits of proper record keeping to the farmers in Uganda
- (b) What could be the features of a good farm record that you would encourage the farmers to keep?



END



SHAPTA JOINT ASSESSMENT BOARD 2024

Uganda Certificate of Education

ART AND DESIGN HOLIDAY PACKAGE

- Read the scenario well and understand it before doing the art work
- Use dry media materials for the art works
- Use elements and principles of art and design.

Item 1

You are soon breaking for holidays, there is going to be a national art and design competition and the theme of the competition is “**my origin my culture**” the art work must depict an African item preferably your culture.

TASK

Make any art work of your choice depicting the above

SHAPTA

END



SHAPTA JOINT ASSESSMENT BOARD 2024

Uganda Certificate of Education

ICT HOLIDAY PACKAGE

Item 1

Your school head teacher would wish to transfer videos that were recorded on the school's day from one computer to the other. The report cards altogether have a capacity of 50GBs. He is advised by the ICT teacher to use storage device(s) to complete this task. He therefore buys a flash disk of 8GBs, DVD-RW of 4.7GBs and a hard disk of 80GBs. a) Help the Head teacher understand the meaning of storage devices.

b) Of the three devices bought, which one do you recommend for use to transfer the videos? State also the reason why you recommend that device.

Device:

Reason:

c) How many DVD-RWs would the head teacher need to transfer all the videos from one computer to the other? Assuming the videos can be broken down.

d) Because you're ICT literate, the head teacher appoints you to help in transferring the videos. Explain the steps you'd take to completely move the videos from computer A to B

Item 2

Your school has hired a secretary to help in typing exams and any other documents that may be required. She is also responsible for processing students' report cards, typing examinations, among others. In summary, the secretary is to deal so much with text-based documents using Microsoft Office Word.

- a) According to the topics you have studied in ICT as a subject, which general name is given to programs that work exactly like the one mentioned above?
- b) Define the following features as used in Microsoft Office word.
 - i. Editing word document
 - ii. Saving a document
 - iii. Checking spelling and grammar errors
- c) What are the four basic steps involved in the starting micro soft word 2016?
- d) Mention any other two programs that work as Microsoft Office Word

Item 3

Computers have today become one of the key aids that help man in the day-to-day activities. Because of this, people are now seen working on computers for more than ten hours a day in order to accomplish their work in the stipulated time. This has posed a danger to their lives.

- a) List down the two major categories of health hazards, one is likely to be faced with if they work on computers for so long.
- b) Mention any two examples of each of the type of health hazards mentioned.
Type one:
Type two:
- c) Mention any two ways symptoms and ways of preventing any of the health hazard mentioned in b) above.

END



SHAPTA JOINT ASSESSMENT BOARD 2024

Uganda Certificate of Education

ENTREPRENEURSHIP HOLIDAY PACKAGE

Item1

Uganda suffers from high unemployment problems and this is mostly experienced by the youths who contribute 70 percent of the population. As a result many of them have resorted to doing their own small business using the small savings and loans. Some of the business they do include Boda Boda riding, chapatti making, hawking where they move around with their stock for sale like clothes, eatables and so on.

TASK

- a) Explain five characteristics of an innovative person in relation to the above statement.
- b) What benefits do they enjoy from being creative.
- c) Explain the risks the above youths are like to face when carrying out their business.

Item 2

Agriculture is the back bone of Uganda's economy and without Agriculture other sectors like the manufacturing sectors cannot survive. Unfortunately it suffers a lot as a sector leading to its poor performance.

- a) Explain any five challenges faced by the Agriculture business sector as stated above which has caused its poor performance.
- b) What are the solutions to the above challenges?
- c) How do you think does the Agriculture business contribute to the country according to the above statement?

Item 3

A group of youths who want to start a business were arguing about different form of business ownership. But today, they approached an entrepreneur who guided them on the different form of business ownership and their merits and demerits. It was realized that partnership is more advantageous than other forms of business ownership especially sole proprietorship.

- a) Explain the reasons why partnership form of business is more advantageous than sole proprietorship business in Uganda.
- b) Help the youths to know the contents of partnership deed.
- c) Advise the youths on the business challenges associated with sole proprietorship business.

SHAPTA

END



SHAPTA JOINT ASSESSMENT BOARD 2024

Uganda Certificate of Education

HIST AND POL. EDUCATION HOLIDAY PACKAGE

Item 1

The History Department of Your in partnership with UNESCO in Uganda is organizing a cultural exhibition on a theme “Buy Uganda, Build Uganda”. This exhibition is intended to equip the youth with entrepreneurial practical skills through using the locally available resources. This will enable them become job creators thus solving poverty and unemployment. They have organized a lot of cultural items ranging from handcrafts, entertainment and gender roles.

TASK.

As a History and Political Education learner;

- a) Identify the various cultural items you intend to exhibit on that day.
- b) How important is the above exhibition to the development of community and East African in general.
- c) Suggest possible ways through which the government can support and develop the local industries.

Item 2

Mr. Ongom an Acholi and Mr. Byanguye from Buganda have lived in Britain for the last 20 years. Their children were born and raised there and have known less about the way of life in their respective societies of origin. The two parents would like you to teach their children about the way of life or organization of their societies of origin.

TASK

As a learner of History and political education, how would you help Mr. Ongom and Mr. Byanguye to address their concern?

Item 3

History as a subject has exposed you to the organization of the pre-colonial trade in East Africa such as barter trade, Indian Ocean trade, Long Distance Trade and slave trade. It is therefore important to conclude that the organization of such trades was a turning point in the history of trade since it came with sweet (good) and bitter (bad) fruits in the economy of East African societies.

TASK

- a) Prepare a piece of work to be placed in the history gallery supporting and explaining the above statement.
- b) As a future business man or woman, suggest the lessons you learn from the pre-colonial trade in East Africa.

Item 4

In the 19th century, East African countries were subjected to both Asian and European colonial rule. Different Asian and European countries rushed to gain control over East Africa. This rush was mainly between the British and Germans who used different methods to take over the region.

TASK

- a) As a learner of history and political education, why do you think the above mentioned powers rushed to take over control of East Africa?
- b) As a typical and capable African chief, would have responded with a “Yes” or “No” to the above stated colonial rule? Give reasons to support your answer.



SHAPTA JOINT ASSESSMENT BOARD 2024

Uganda Certificate of Education

GEOGRAPHY HOLIDAY PACKAGE

Item 1

Following a realization that the environment is being degraded, your Local council Chairperson has called a village meeting to address the community of the causes and effects of environmental degradation.

TASK

As a learner knowledgeable in matters of natural resources and the environment, assist the chairperson by addressing the community and also identify the ways of overcoming the problems.

Item 2

You have come across your Old boys/Old girls having an argument about the structure of the earth, its rotation and revolution, the emergence of days and night as well as changes in temperature.

TASK

As a learner of Geography, help your friends settle this argument once and for all.

Item 3

Residents of Kyamukaka village in the Kyamukaka Millet SACCO wanted to dry their crops for two days to sell their produce to the market but after drying them outside their home compounds unfortunately they fear to be disrupted by abrupt Weather changes such as rain fall.

TASK

a) What traditional methods can you use to predict the weather and help the Kyamukaka Residents for that fear of abrupt weather changes?

Item 4

One of the effects of climate change in East Africa is the increased rate at which glaciers are melting in the highland areas especially the Ruwenzori. This leads to the increase in water levels in lakes and rivers, for example in 2014 it led to flooding of rivers Nyamwamba and Mubuku in Kasese leading to destruction of property and two people died on spot.

TASK

a) Explain ways in which human beings contribute to the occurrence of climate change problem.

b) Discuss other ways in which the environment and people have been affected by climate change.

C) How can you combat the phenomenon of climate change in your community?

SHAPTA

END



SHAPTA JOINT ASSESSMENT BOARD 2024

Uganda Certificate of Education

LUGANDA HOLIDAY PACKAGE

Item 1

Ekitundu kyowangaaliramu mulina ekizibu kyokutindigga eggendo nga mugenda ku ssomero eriri ewala olwensonga nti obusomero obuli Ku kyalo tebutuukana namutindo.era tebusaana kusomesezaamu mwana.mu butuufu busaana kuggalwa.

- a)Ggwe ng'omuyizi nnyonyola ebintu ebyenkizo ebitalina kubula Ku ssomero nemigaso gyabyo ebibaleetera okutindigga eggendo okugenda Ku ssomero eriri ebweya
- b) Menya ebika bya Bantu kkumi abasangibwa ku ssomero nemirimu gyabwe mu liri eritwalibwa okuba Ku mutindo ogwawaggulu.
- c) Nnyonyola ebintu ebitera okukolebwa mu ssomero lyammwe buli lunaku ebitakolebwa mu busomero obuli Ku kyalo kyammwe.

Item 2

Omwana kuva buto ngalina okulabirirwa obulungi okusobola okukula nga tawanyiziddwa ndwadde nokweyagaza omuzaddomuzade

- a) Laga endwadde ezirabika nga zeziruma omwana ali Ku ndiri mu kiragibwa ekyo atenga zitera nokukwata abaana
- b) Bintu ki gwe byolaba nga bye biviridde endwadde ezo zoolaze waggulu
- c) Omuzadde atasobola Ku twala mwana mu ddwaliro nnyonnyola eddagala egganda lya yinza okuwa omwana endwadde ezimuluma ne ziwona
- d) Laga ebintu omuzadde byalina okukola okwewaza abaana okufuna endwadde.





SHAPTA JOINT ASSESSMENT BOARD 2024

Uganda Certificate of Education

KISWAHILI HOLIDAY PACKAGE

1. MICHEZO: INSHA

1. Shuleni kwenu Kuna michezo mbalimbali . Kuna michezo ya nje uwanjani na michezo ya ndani majengoni. Ni umuhimu kwa Kila mwanafunzi kushiriki katika michezo.

Andika insha ukieleza michezo mbalimbali, umuhimu wa kushiriki katika michezo mbalimbali, vifaa vinavyotumika, na namna ya kuepukana na ajali katika michezo. (Kati ya manono 120_150) (Alama 15)

2. SHULENI: UFAHAMU

Jina langu ni Amanywa Osbert. Ninasomea shule ya upili ya Kagarama. Inapatikana katika wilaya ya Ntungamo. Shuleni , Kuna watu mbalimbali ambao wanashirika katika kufanya kazi mbalimbali ili masomo yaendeleye vyema. Shele yetu in wanafunzi elfu moja. Wanafunzi wote wanpendana vizuri na wana dhambi nzuri.

Shuleni kuna watu wengi yaani Kuna wanaofundisha, wanaopika chakula, wanaosafisha shule ndima na hata wanaoleta usalama Kila wakati. Kwa mfano

Kuna Topasi. Jina lake ni bwana kwatampola, kazi yake ni kusafisha mslani/chooni. Yeye ni mzuri Sana. Anapenda kufanya kazi zake mapema.

Mwalimu wetu wa kiswahili anaitwa Bwana Agaba Simon. Anafundisha vizuri na Kila mwanafunzi anapenda sana. Kila juma tatu, wanafunzi wanamletea vinywaji na vyakula kutoka nyumbani. Ni lazima wanafunzi wanampenda Sana.

Wapishi wanapika na kupakua chakula katita wakati wanaotarajiwa. Wanapakua chakula kinachotosha na wanafunzi wanampenda shule yetu kwa ajiri hiyo na hawawezi kufanya mgomo yeyote kwa ajiri hiyo.

Nesi Nakabuye anatibu wanafunzi wagonjwa lakini antunza wanafunzi wakiwa wagonjwa kwa kuongea vibaya, kuwacharaza, baadhi yao kukataa kuwapa dawa na hata haki zao zinakiukwa.

Sheleni kulipandwa maua mazuri yanayopendeza na hata pia miti ambayo inaleta hewa nzuri shuleni, pia inatoa vivuli ambamo wanafunzi wanakaa kujadiliana Mambo mbalimbali ya masomo.

Maswali.

- I) Pendekezeni kichwa Cha masimulizi haya. (Alama 2)
- ii) Taja jina la msimulizi pamoja na shule yake. (Alama 2)
- iii) Taja jina la Mwalimu wa kiswahili na kwanini wanafunzi wanampenda?
(Alama 2)
- iv) Eleza shughuli mbili zinazofanyika shuleni kutokana na makala. (Alama 2)
- v) kwanini wanafunzi hawampendi nesi wao? Eleza sababu mbili. (Alama 2)
- Vi) Eleza umuhimu wa miti katika shule. (Alama 2)
- Vii) Taja watu nne wa shuleni uanaojua. (Alama 3)

SHAPTA

3. NYUMBA.

Baba yako anataka kujenga NYUMBA ya kisasa na hata ameamua kuuza ploti yake ya ardhi mjini Masaka. Kwasababu hiyo amekuomba Kama mwanafunzi ambeye amesoma na kupata akili kumshauri kuhusu aina ya nyumba atakayojenga.

- a) Eleza sehemu tano za nyumba ambazo nyumba ile itakuwa nazo.(Alama 5)
- b) Andika vitu sita ambavyo baba yako anatarajiwa kuweka nyumbani.(Alama 6)
- c) kwa nini nyumba ya kisasa ni bora kuliko nyumba ya kitamaduni. Eleza sababu nne. (Alama 4)



MWISHO.



SHAPTA JOINT ASSESSMENT BOARD 2024

Uganda Certificate of Education

CRE HOLIDAY PACKAGE

Item 1

On 22nd march 2021, all the Christians were engaged to conduct family prayers from their homes due to covid 19 pandemic that had affected the whole world. It was illustrated clearly by the Arch Bishop Grace Steven Kazimba on NTV

- a) Why do you think worship took place at people's homes?
- b) Identify the advantages of family prayers during the season.
- c) What are the different forms of worship one can engage in while at home.
- d) In your opinion, what do you think Christians missed by not going to church for congregational worship?

Item 2

Societies today are changing. Many people have become career-oriented and care less about marriage. People are comfortably choosing to live as single parents. As long as one has a good job, marriage is no longer considered a necessity. In addition, societies are being attacked by the vice of sexual deviations.

Homosexuality is on the rise. The elders, politicians, local community leaders and religious leaders are all concerned because marriage is God's original plan. You have been invited by a Reverend of the Church of Uganda in your community for sensitization on marriage.

TASK

Prepare sensitization message of 100 words on the importance of marriage in fostering the values of love, honesty, respect and generosity in the community.

Item 3

One of the observations about religions is that they all adore a common being who is responsible for all that exists. It is believed that even other creatures listen and believe in him.

TASK

With examples, compare and contrast the beliefs in Islam, Christianity and African traditional religion.

Item 4

Supposing your best friend Agnes who is 16 years old just finished her senior four. As she awaits for her results, she did not want to keep idle. Her father Elly got for her a job through his best friend. She was happy and she started doing her new job. Unfortunately, Agnes' supervisor was a 50-year-old man who kept demanding Agnes for sex if she wants to work with them. Agnes was confused and did not know what to do.

TASK

Write a piece of advice to your friend Agnes on how to deal with the situation.

SHAPTA

END



SHAPTA JOINT ASSESSMENT BOARD 2024

Uganda Certificate of Education

IRE HOLIDAY PACKAGE

Item 1

Every evening, Yusuf and Hamza come back home from school and go for a betting station yet Islam does not allow such ways of earning wealth and such ways of a living.

TASK

Advise Yusuf and Hamza on how they should enjoy their leisure.

Item 2

Marriage is one of the most beautiful gift in life but you find that many marriages have failed to work out though others to some extent have successful.

TASK

- a) In your opinion what do you think are some of the principles that can help marriages to last longer?
- b) Identify five characteristics of Traditional African Families

Item 3

The coming of the Day of Judgment is soon coming and no one knows the exact day. Quran gave some of signs that will take place before the final hour.

TASK

a) As a learner of Islam, briefly explains the only signs of the Day of Judgment that have already happened in the world today.

Item 4

Read and answer questions that follow. Islam teaches that angels are heavenly, immortal beings, God's first creation.

According to the Quran, human was formed from clay, but angels were made out of light. They are God's messengers, the channels through which we can become aware of his laws and his purpose in our lives. They are God's servants and they can take on many without sin and so they can enter into God's divine presence, and they can also communicate with humans. Muslims believe that, although angels are invisible, they exist everywhere, thought the whole universe. They are never far away and they are always in contact with humans especially when someone prays or thinks about God. They have no physical bodies but the Quran describes them as having wings and they are always described as male. The Quran says, "Whoever is an enemy to Gabriel- it is (none but) he who has brought the Quran dawn upon your heart, (Omuhammad), by permission of God", confirming that which was before it and as guidance and good tiding for the believers. Quran 2:27.

TASK

a) As a believer, mention the unique nature in which Allah created his angels in reference to the passengers.

b) Mention and give the duty of each.

SHAPTA

END

