



# THE E-LEARN EXAMINATIONS BOARD

PRE NATIONAL MOCK 2024

SET ONE / FOUR

SOCIAL STUDIES WITH RELIGIOUS EDUCATION

*Time Allowed: 2 hours 15 minutes*

Index No.	EMIS No..					Personal No..		

Pupil's Name:.....

Pupil's Signature: .....

School Name: .....

District Name: .....

Read the following instructions carefully:

1. Do not forget to write your **school** or **district name** on the paper..
2. This paper has two sections: **A** and **B**.. Section **A** has **40** questions and section **B** has **15** questions.. The paper has **15** printed pages..
3. Answer **all** questions.. **All** working for both sections **A** and **B** must be shown in the spaces provided..
4. **All** answers **must** be written using a **blue or black** ball point pen or ink.. Any work written in pencil will **not** be marked..
5. Unnecessary **changes** in your work and handwriting that cannot be read easily may lead to **loss of marks**..
6. Do not fill anything in the table indicated: "**For Examiners' use only**" and boxes inside the question paper

FOR EXAMINERS' USE ONLY		
Qn.. No..	MARKS	EXR'S NO..
1 – 10		
11 – 20		
21 – 30		
31 – 40		
41 – 43		
44 – 46		
47 – 49		
50 – 52		
53 – 55		
<b>TOTAL</b>		

**SECTION A: 40 MARKS**

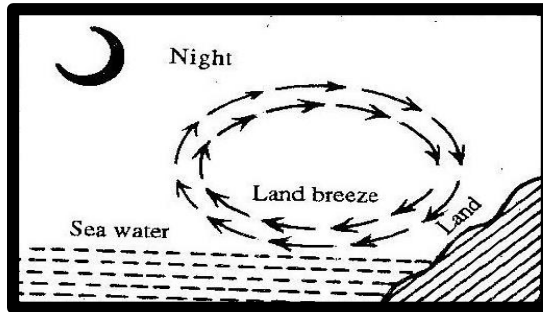
Questions **1** to **40** carry **one** mark each.

1. Why is the equator marked 0°?  
.....
2. What title is given to the highest civil servant in a ministry?  
.....
3. How does disrespecting of elders lead to child abuse?  
.....
4. Write **one** way culture promotes social development.  
.....
5. State **one** way man can use land to earn a living.  
.....
6. How does bush burning lead to environmental degradation?  
.....
7. Which factor of climate affects human settlement.  
.....
8. State **one** way the legislature promotes the work of the judiciary.  
.....
9. Emma who lives in Accra found out that it was 4:00pm in East Africa, what time was it in Accra?  
.....
10. Mention the newly created landlocked country which is a member of the East African community.  
.....
11. Name the strip of water which join the Mediterranean Sea to Red sea.  
.....
12. Give **one** danger of living near a stone quarry.  
.....

13. Write **one** factor that makes it difficult to extend hydroelectricity to Kalangala District.

.....

Study the diagram below and answer questions **14** and **15**.



14. Name the type of breeze shown above.

.....

15. How does temperature differences contribute to the above type of breeze?

.....

16. Which bank is jointly owned by members of the East African Community?

.....

17. How did Assimilation policy negatively affect the people of Senegal?

.....

18. What term is used to describe the temperate grasslands of south Africa?

.....

19. State **one** way the government can promote the tourism industry.

.....

20. Why did it take time for Arabs to spread Islamic religion at the coast?

.....



21. How do slippery roads make transport difficult?

.....

22. Who was the first non-executive president of Uganda?

.....

23. Which water passage separates Africa from Europe?

.....

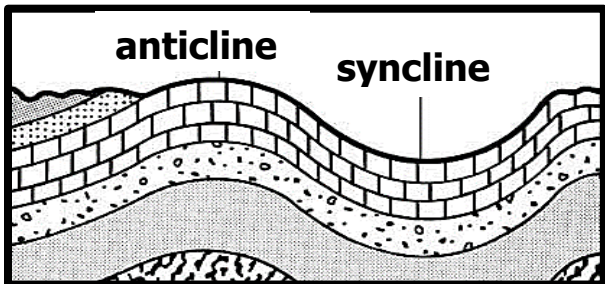
24. State **one** way a distributary affects the volume of water in a river.

.....

25. Which discovery enabled man to live a settled life?

.....

Study the diagram below and answer questions **26** and **27**.



26. By what process was the above feature formed?

.....

27. Name **one** mountain in Africa that was formed by the process named in **26** above.

.....

28. Write **one** reason why a camel is referred to as **the ship of the desert**.

.....

29. How does a waterfall promote the growth of industries?

.....

30. Name the largest inland slave market in East Africa.

.....



31. Who signed the 1900 Buganda agreement on behalf of Buganda Kingdom?

.....

32. Give **one** reason why the Sudanese soldiers staged a mutiny.

.....

33. Which event took place on 9<sup>th</sup> October 1962 in Uganda.

.....

34. Write **one** characteristic of convectional rainfall?

.....

35. A part from block mountains, write **one** other feature that can be formed as a result of faulting.

.....

For each of the questions **36** to **40**, answer **EITHER** the Christian **OR** Islamic question but not both. **No mark** will be awarded to a candidate who attempts both alternatives in a **particular number**.

36. **EITHER:**

How did the follower of Jesus Christ who betrayed him meet his death?

.....

**OR:**

Why did prophet Muhammad(PBUH) move from Mecca to Medina?

.....

37. **EITHER:**

How was the creation of man different from other creatures?

.....

**OR:**

How was the creation of man different from other creatures?

.....

38. **EITHER:**

Mention **one** thing a Christian can give to God the Father for appreciation.

.....

**OR:**

Mention **one** thing a Muslim can give to Allah for appreciation.

.....

39. **EITHER:**

State **one** reason why Christians marry.

.....

**OR:**

**Turn Over**

Give **one** reason why Muslims marry.

.....

40. **EITHER:**

What term refers to giving of alms in Christianity?

.....

**OR:**

Name the group of people who qualify to pay Zakat.

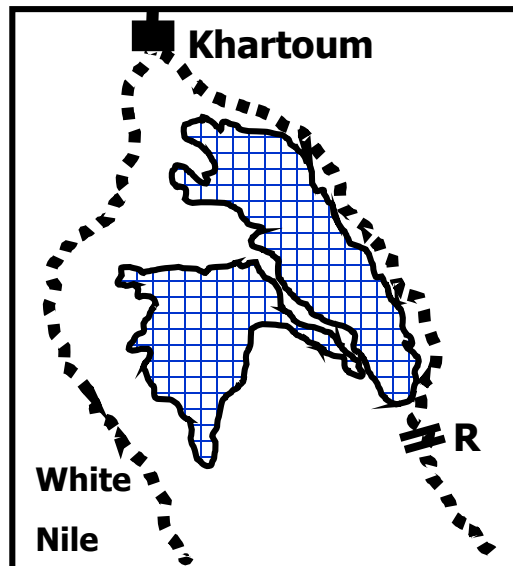
.....



**SECTION B: 60 MARKS**

Questions **41** to **55** carry four marks each.

41. Study the sketch map below and answer the questions that follow.



(a) Name the dam marked **R**

.....

(b) Which part of the Nile is the main source of water for the above scheme?

.....

(c) Use letter **X** to mark the area where cotton is mainly grown on the above scheme

.....

(d) Write **one** factors that contributed to the establishment of the above scheme.  
.....

42. (a) Who is a citizen?  
.....

(b) State **two** ways one can acquire citizenship in Uganda.  
(i).....  
(ii).....

(c) Write **one** factor that can lead to loss of citizenship in Uganda.  
.....

43. (a) Who is an enumerator?  
.....  
.....

(b) Mention any **two** information collected during population census.  
(i).....  
(ii).....

(c) Name the body responsible for conducting population census.

44. (a) Give **two** reasons why it's important for landlocked countries to unite.  
(i).....  
(ii).....

(b) Mention **one** economic bloc that unites countries in Southern Africa.  
.....

(c) Name the military wing responsible for maintaining peace in **ECOWAS** member states.  
.....

45. (a) Why was slave trade regarded as evil against mankind?  
.....

**Turn Over**

(b) How did the Dr. David Livingstone contribute to the abolition of slave trade in East Africa.  
.....

(c) Mention **two** treaties that were signed to stop slave trade in East Africa.

(i).....

(ii).....

46. (a) Name the winds responsible for the Mediterranean climate at the extreme north of Africa.  
.....

(b) Write **two** factors that favour the growing of citrus fruits.

(i).....

(ii).....

(c) Mention **one** example of citrus fruits.  
.....

47. Match the information in list **A** to that in **B**.



- |                  |                                     |
|------------------|-------------------------------------|
| Grace Ibingira   | designed the coat of arms           |
| George W. Kakoma | designed the independence monument  |
| Paul Mukasa      | designed the Uganda flag            |
| Gregory Maloba   | composed the Uganda national Anthem |

Grace Ibingira .....

George W. Kakoma .....

Paul Mukasa .....

Gregory Maloba .....

48. (a) Write **two** sources of history.

(i).....



(ii).....


(b) Why is Dr. Louis Leakey remembered in the history of East Africa?

.....

(c) How did iron smelting improve early man's life?

.....

Study the diagram below and answer the questions that follow.



49. (a) Which vegetation zone has the above characteristic?

.....

(b) Mention **two** types of tree species that grow in the above vegetation zone.

(i).....

(ii).....

(c) Name the type of trees that shed their leaves during the dry season.

.....



50. (a) Which mineral is mined in Williamson mine – Shinyanga in Tanzania?

.....

(b) Why is mining called an industry?

.....

(c) State **two** problems faced by the mining industry.

(i).....

(ii).....

**Turn Over**

For each of the questions **51** to **55**, answer **EITHER** the Christian **OR** Islamic question but not both. **No mark** will be awarded to a candidate who attempts both alternatives in a **particular number**.

**EITHER:**

51. (a) Mention **two** books in the bible which were written by Moses.

(i).....

(ii).....

(b) Write **two** ways through which Christians show respect to the Bible.

(i).....

(ii).....

**OR:**

(a) Apart from the Quran, name other **two** books in Islam.

(i).....

(ii).....

(b) State **two** ways Muslims show respect to the Qur'an.

(i).....

(ii).....

**EITHER:**

52. (a) How do we call the followers of Jesus Christ?

.....

(b) Which follower:

(i) denied Jesus Christ three times.....

(ii) replaced Judas Iscariot.....

(c) Why was Jesus Christ betrayed by one of his followers?

.....

**OR:**

(a) Name **two** of the caliphs of Prophet Muhamad (PBUH).


(i).....

(ii).....

(b) Write **two** ways the people of Mecca reacted towards the teaching of Prophet Muhamad (PBUH).

(i).....

(ii).....



**EITHER:**

53. (a) Mention **two** Christian relief organisations operating in Uganda.

(i).....

(ii).....

(b) State **two** ways the above mentioned relief organizations have contributed to the economic development of Uganda.

(i).....

(ii).....

**OR:**

(a) Mention **two** Islamic organisations operating in Uganda.

(i).....

(ii).....

(b) State **two** ways the above mentioned organizations have contributed to the economic development of Uganda.

(i).....

(ii).....

**EITHER:**

54. (a) Why do Christians fear death?

.....

**Turn Over**

(b) Where will the righteous people go after judgement day?

.....

(c) Mention **two** events that will take place on the day of judgement.

(i).....

(ii).....

**OR:**

(a) Why do Muslims fear death?

.....

(b) Where will the righteous people go after judgement?

.....

(c) Mention **two** events that will take place on the day of judgement.

(i).....

(ii).....

**FOR BOTH:**

55. (a) State **two** causes of misunderstandings in the community.

(i).....

(ii).....

(b) Mention **two** traditional ways of reconciling with others.

(i).....

(ii).....



*This set was sponsored by:*

**END**



**TRUST HIGH SCHOOL  
KABUBBU (GAYAZA)**  
"Strive for Excellence"

CONTACTS  
P.O. Box 19020 Kasangati  
Tel.: (+256):755-583 704 (Director)  
774 196 494 (Head teacher)  
705-100 479 (Deputy HM)  
Bursar: 0752 090 877/0772 582 704

Boarding Students		Day Students	
S.1 - S.4	1,200,000/=	S.1 - S.4	450,000/=
S.5 - S.6	1,500,000/=	S.5 - S.6	500,000/=