



ASBAT EXAMINATIONS BOARD
END OF TERM I EXAMINATIONS 2024
MATHEMATICS
PRIMARY ONE

Name: **Class:**

1. Draw these sets.

a) A set of 4 books.

b) A set of 2 chairs.

2. Fill in the missing numbers.

a) 15, 16, 17, _____, 19, _____

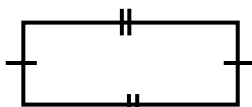

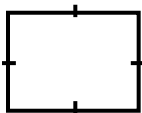
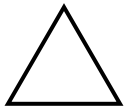
b) 30, _____, 32, 33, _____, 35

3. Circle the bigger number.

a) 6 or 3

b) 21 or 27

4. Match these shapes to their names.



Rectangle


Triangle

Square

Circle

5. Name these sets.

a)



b)



6. Add:

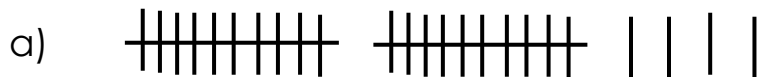
a) $5 + 4 =$ _____

b)
$$\begin{array}{r} 3 \\ + 2 \\ \hline \end{array}$$

c) **3** pencils **plus** **4** pencils equals _____

d) **Three** plus three equals _____


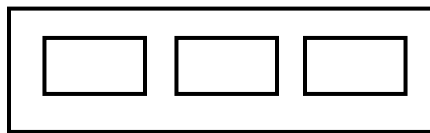
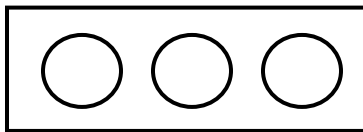
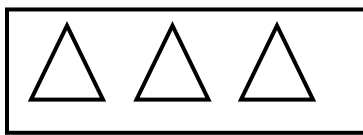
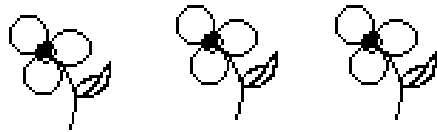
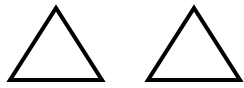
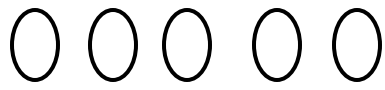
7. Fill in tens and ones.



_____ tens _____ ones

b) **73** = _____ tens _____ ones

c) **6** = _____ tens _____ ones





ASBAT EDUCATION CONSULT

Dear Head Teachers/Administrators

We thank you for the support rendered by using our Educational products ranging from **Exams, Workbooks, Notes, Text books, Revision Pamphlets and many other**. We bring the **End of Term 1 Examinations** both in hard and soft copies at the best rates as below;

SOFT COPIES: 5000/- @ Class, All Subjects

HARD COPIES:

Company Branded	
Upper Primary	850/-
Lower Primary	800/-
Nursery	750/-
Customised (School Name & Logo)	
All Classes	1000/-

Note:

Marking Guides are available.

This is a product of **ASBAT Education Consult** | Located at Plot 3, KTS Road, **Makerere University** | Contact Us: 0780243415/ 0705225627 | For More Resources, Visit: www.asbatdigitallibrary.org

Quality Education for All

TO HAVE ACCESS TO FULL SETS OF OUR EXAMS:

CALL: 0705225627 OR WHATSAPP: 0780243415

