

# SMART QUALITY EDUCATION SERVICES



FINAL PRE PLE SET 2023

PRIMARY SEVEN

## SOCIAL STUDIES WITH RELIGIOUS EDUCATION

*Time Allowed: 2hours 15minutes*

Random No.:						Personal No.:		

Name: \_\_\_\_\_

Candidate's Signature: \_\_\_\_\_

District ID. Code 

--	--	--	--

School Name: \_\_\_\_\_

Read the following instructions carefully

1. Do not forget to write your school or district on the paper
2. This paper has two sections: **A** and **B**.  
Section **A** has **40** questions and Section **B** has 15 Questions.
3. Answer **all** questions. All answers to both section **A** and **B** must be written in the spaces provided.
4. All answers must be written using a **blue** or **black** ball point pen or ink. Any work written in pencil will not be marked.
5. Unnecessary changes in your work and hand writing that cannot be read easily may lead to loss of marks.
6. Do not fill any thing in the table indicated  
**"FOR EXAMINERS USE ONLY"**

For Examiners Use Only		
QN. NO	MARKS	EXR'S NO.
1-10		
11-20		
21-30		
31-40		
41-50		
51-60		
61-70		
71-80		
81-90		
91-100		

TURN OVER

*Training of the Mind to think!!!*

Tel: 0784958341/ 0704601393/ 0779520860

**SMART QUALITY EDUCATION SERVICES**

## SECTION A: 40 MARKS

Answer all questions in this section

1. Name the school symbol which encourage learners to work hard.  
.....
2. How does climate influence people's way of dressing?  
.....
3. Which kingdom had Nabongo as the title of the traditional leader?  
.....
4. Why was the Union Jack raised in Uganda before 1962?  
.....  
.....
5. How were the Aberdare forests important to Mau-Mau fighters in Kenya?  
.....  
.....
6. Name the physical feature on which ships are used as means of water transport?  
.....
7. State any **one** way in which the government of Uganda can overcome a deficit budget.  
.....
8. Which type of industries use raw materials from agriculture?  
.....
9. Give any **one** cause of increasing cases of the youth going mad.  
.....
10. If it is 6:00am in Uganda, what will the time be in Rwanda?  
.....

11. What role was played by frontline states in the fight against Apartheid policy?

.....  
.....

12. Name the landlocked country which was linked to the coast of East African by constructing the Tanzam railway.

.....

13. What does the road sign below represent?



.....

14. What type of leader is a Resident District Commissioner?

.....

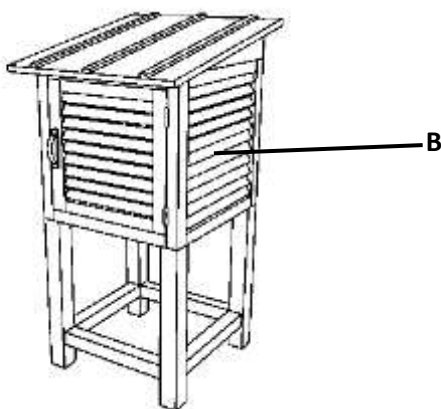
15. Which side of the road are pedestrians supposed to use?

.....

16. Write NIRA in full.

.....

17. Study the structure below.



How is part marked B important on the above structure?

.....  
.....

18. State any **one** advantage of using a bicycle over an aeroplane

.....  
.....

19. Name the international organization which was formed to promote World peace and security after world war I.

.....

20. Why is Uganda numbered degrees North and South of latitude 0<sup>0</sup>?

.....  
.....



21. How coral reefs contribute to construction companies in Africa?

.....  
.....

22. What is global warming?

.....  
.....

23. Why are tropical rainforests evergreen?

.....  
.....

24. What role was played by prince Henry the navigator towards exploration work in Africa?

.....

25. Which system of government promotes dictatorship?

.....

26. How did escarpments affect the construction of the Uganda railway?

.....  
.....

27. Which illegal activity reduces the number of wild animals in national parks?

.....

28. How did the 1967 constitution affect cultural institutions in Uganda?

.....

.....

29. How do schools promote social development in communities?

.....

.....

30. Why was African's reactions towards colonialization rule easily brought down by the European colonialists?

.....

.....



31. State any **one** possible cause of urban rural migration.

.....

.....

32. How were ethnic groups politically organized before post-independence?

.....

.....

33. Name the pastoral community found in both Kenya and Tanzania.

.....

34. How did the missionaries improve the social lives of Africans?

.....

.....

35. Which mineral is mined from Lake Magadi in Kenya?

.....

.....

For Questions 36 - 40 answer either Christianity or Islam Questions but not both.  
No marks will be given to a candidate who attempts both number

36. **Either:**

Name the firstborn son of Abraham and Hagar

.....

**OR:**

Name the firstborn son of prophet Ibrahim and Hajarah.

.....

37. **Either:**

Name the lamb of God who reconciled God with mankind.

.....

**OR:**

Name the prophet of Allah to Whom the injil was revealed.

.....

38. **Either:**

Mention the second commandments according to Exodus chapter 20.

.....

**OR:**

Mention the second pillars of Islam.

.....

39. **Either:**

Sate any **one** way Christians can fish other people to God.

.....

.....

**OR:**

State any **one** way Moslems can encourage other people to follow Allah

.....  
.....

40. **Either:**


Mention any **one** selfless act Christians can offer to other people.

.....

**OR:**

Mention any **one** act of charity able Moslems provide to the people.

.....



**SECTION B: 60 MARKS**

Answer all questions in this section

41. The diagram below shows one of the symbols of Uganda as a nation use it to answer questions that follow.



a) What do the stripes below the shield symbolize on the attribute shown above?

.....

b) Name the Ugandan who designed the attribute above.

.....

c) State the importance of the national attribute shown above.

.....

d) Apart from the above attribute, give one other attribute which was given to the prime minister during handover independence celebration from Britain

.....

42. a) Name the organization which replaced OAU.

.....

b) Give the reason why the organization named in "a" above replaced O.A.U

.....

.....

c) State **two** organs of the organization named in 42a)

(i) .....

(ii) .....

43. a) Which group of European explorers built fort Jesus at Mombasa in Kenya?

.....

b) State **two** factors which made the group of explorer mentioned in "a" above successfully conquer the East African coast .

(i) .....

(ii) .....

c) Give a reason why the explorers mentioned above settled at the East African coast.

.....

.....

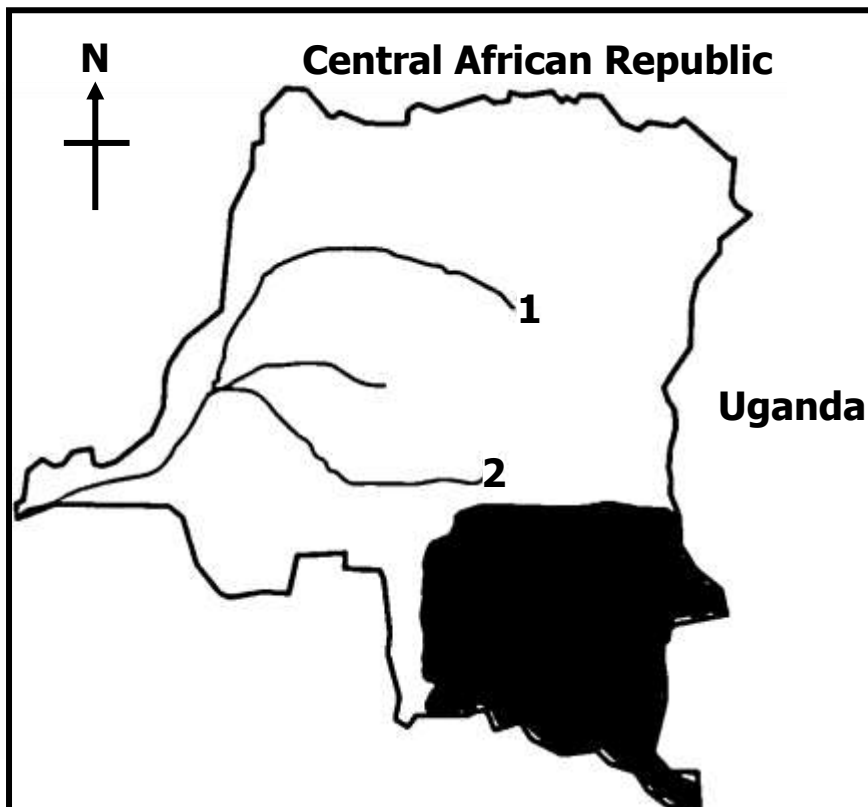




44. The table below shows different types of leaders and how they are obtained, complete it correctly.

Political leaders	.....	Civic leaders	.....
.....	Inheritance	.....	Ordination

45. Study the map below and questions about it.



a) Which minerals resource is mined in the area shaded above?

.....

b) Name the rivers numbered 1 and 2

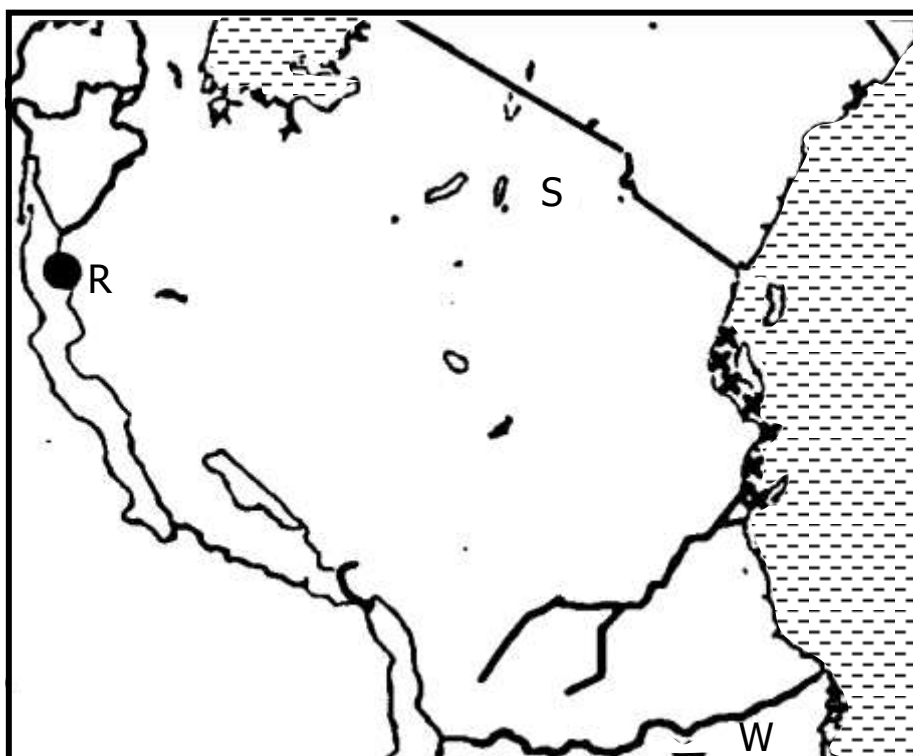
1 .....

2 .....

c) State the political problem facing the country above.

.....

46. Study the map below and answer questions about it



a) Name the country marked with letter w.

.....

b) How is town marked with letters S important in the growth in the growth of EAC?

.....

c) Which factor favors the growth of the type natural vegetation found at area xxx?


.....

d) How is part R important to Tanzania?

.....



47. a) State any **two** challenges affecting economic development in Africa.
- (i) .....
- (ii) .....
- b) Mention **two** ways in which people can contribute to the economic growth a country.
- (i) .....
- (ii) .....
48. a) What are multipurpose river projects.
- .....
- b) Give **two** advantages of multipurpose river projects.
- i) .....
- ii) .....
- c) Which multipurpose power dam was set up on River Volta in Ghana
- .....
49. a) Which system of administration did the German use in Tanganyika?
- .....
- b) How did the system named above affect the natives of Tanganyika socially?
- .....
- .....
- c) Mention any **two** rebellions which were staged against German rule in Tanganyika
- (i) .....
- (ii) .....



50. a) State the **two** types of culture.

(i) .....

(ii) .....

b) Give **two** importance of culture.

(i) .....

(ii) .....

For questions 51- 55, answer either Christianity or Islam questions but not both No, marked will be to a considerate who attempts both questions in a number.

51. **Either**

a) What is prayer?

.....  
.....

b) What type of prayer is the Lord's prayer?

.....

c) State the reason why Christians pray during the moments below

(i) when going to sleep.

.....

(ii) at the start of an examination.

.....

**OR**

a) What is salat?

.....  
.....

b) Which type of prayer is said by Moslems at 8:00pm daily

(i) when going to sleep

.....

(ii) at the start of an examination

.....

**52. Either:**

a) Name the apostles of Jesus who was a medical doctor.

.....

b) Give **two** ways how the Apostle were helpful in the spread of Christianity.

(i) .....

.....

(ii) .....

.....

c) Which Apostle did Jesus leave in control of the church after his ascension.

.....

**OR:**

a) Name the first caliph of prophet Muhammad.

.....

b) Give **two** ways how caliphs were helpful in the spread of Islam.

(i) .....

.....

(ii) .....

.....

c) Which caliphs is remembered for establishment of the written version of the Quran?

.....



53. **Either:**

a) What is success?

.....  
.....

b) Write down any **two** factors that can be help a Christian child to succeed in academics.

i) .....

ii) .....

c) Why is it dangerous for a child to join bad peer groups at school?

.....  
.....

**OR:**

a) What is success?

.....  
.....

b) Write down any **two** factors that can help a Moslem child to succeed in academics.

i) .....

ii) .....

c) Why is it dangerous for a child to join bad peer groups at school.?

.....  
.....

54. **Either:**

a) Which sacrament unites a man and a woman as husband and wife?

.....

b) Why do people who are planning to get married consider 'age' as a key factor?

.....

.....

c) Mention any **two** kinds of marriage not allowed in the Christian church of Uganda.

(i) .....

(ii) .....

**OR:**

a) What is Nikkah?

.....

.....

b) Why do people who are planning to get Married consider 'age' as key factor?

.....

.....

c) Mention any **two** kinds of marriages not allowed in Islam.

(i) .....

(ii) .....

55. **Either:**

My commandment is this, "love one another just as I have loved you".  
(John 15:12)

a) Who said the above words?

.....

b) To whom were the above words said?

.....

c) State any **two** ways you can show love to other people.

i) .....

ii) .....

**OR:**

Verily, Allah will say on the day resurrection where are those who love each other for sake of my Glory's sake?( book 32, number 6225)

a) Who will say the above words?

.....

b) State any **three** ways you can show love to Allah's people.

i) .....

ii) .....

iii) .....



**END**