

KOLFRAM EDUCATIONAL SERVICES KAMPALA



PRE REGISTRATION EXAMINATION SET **TWO** 2024

PRIMARY SEVEN

SOCIAL STUDIES WITH RELIGIOUS EDUCATION

Time allowed: 2 hours 15 minutes

Index Number:

Random Number						Personal Number		

Candidate's Name:

Candidate's Signature:

School Name:

District Name:

DO NOT OPEN THIS BOOKLET UNLESS YOU ARE TOLD TO DO SO

Read and follow these instructions carefully:

1. This paper has **two** sections: **A** and **B**. Section **A** has **40** questions and section **B** has **15** questions. The paper has **10** printed pages.
2. Answer **all** questions. **All** answers to both sections A and B must be shown in the spaces provided.
3. All answers **must** be written using a **blue** or **black** ball point pen or ink. Any answer written in pencils other than on graphs and diagrams will **not** be marked.
4. No calculators or **electronic** pens are allowed in the examination room.
5. Unnecessary **changes** in your work and handwriting that cannot be read easily may lead to **loss of marks**.
6. Do not fill anything in the table indicated: **"FOR EXAMINERS' USE ONLY"** and boxes inside the question paper.

FOR EXAMINER'S USE ONLY

QN. NO.	MARKS	EX'ER'S INITIAL
1 -10		
11 - 20		
21 - 30		
31 - 40		
41 - 43		
44 - 46		
47 - 49		
50 - 52		
53- 55		
TOTAL		

Turn Over

© 2024 KESK P7 END OF FEBRUARY SOCIAL STUDIES WITH R.E EXAMINATION

Trust Kolfram Educational Services for quality workbooks, companion books, PLE revision workbooks, PLE question Banks, Topical workbooks, Quality Assessments and Holiday packages

SECTION A: 40 MARKS

(Questions 1 to 40 carry one mark each.)


1. Why do you think a tourist who comes to Uganda is given a map of Uganda?

2. Which physical feature greatly attracted most early explorers to Uganda?

3. Name the African country which changed its capital city from Bujumbura to Gitega.

4. How is Kasubi hill important in the social development of Buganda?

5. Name the map symbol represented below.



6. Give **one** reason why mechanization is difficult in highland areas.

7. Mention **one** group of people who put on uniforms during their work.

8. Give any **one** reason why a health centre should have an ambulance.

9. Name the road signs shown below.

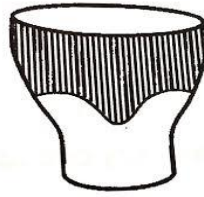


10. From which direction does the earth spin?

11. Name the largest fresh water lake found on the central plateau of Uganda.

12. Which game park has the biggest population of hippos in Uganda?

Below is a diagram of a drum. Use it to answer the questions that follow.



13. In which way is the above item similar to a whistle in term of their use?

14. What is population structure?

15. Why is Lake Kyoga the swampiest lake in Uganda?

16. Name only city in Africa crossed by the Prime Meridian.

17. What term is used to mean the period when the sun overheads the tropic of Capricorn?

18. How did Robert Ashe contribute to the transport network in Uganda?

19. How did the early man use bolas to live a better life?

20. Why do you think Kalangala district receive convectional rainfall?

21. Why didn't Daudi Chwa sign the 1900 Buganda agreement?

22. What are deciduous trees?

23. Name the first Arab trader to come to Uganda.

24. Name the mineral mined from Osukuru Hill in Tororo.

25. How do planted forests support the wood pulp industry?

26. Name the continent in which Uganda is found.

27. The time Dodoma is 11: 45 am. What time will it be in a place which is $60^{\circ}W$?

28. State the main reason why Africa is known as the dark continent.

29. State the main reason why Uganda is divided into districts.

30. Give **one** cause of misunderstanding between the school and the community.

31. How is a mobile phone similar to a radio?

32. What do we call the uplifted part of a fold mountain?

33. Kawumpuli was going to Owino facing North West direction. He turned at an angle 225° clockwise. What is his new direction?

34. Why are cactus trees able to survive in semi-desert conditions?

35. Why is Dr. Louis Leakey remembered in the history of Africa?

For each of the questions **36** to **40**, answer **EITHER** the Christian **OR** Islamic questions but not both. No marks will be awarded to a candidate who attempts both alternatives in a particular number.

36. **EITHER**: Why is the Bible called a Holy book?

OR: Why is the Qur'an called a Holy book?

37. **EITHER**: Who was the wife of Adam?

OR: Who was the wife of Adam?

38. **EITHER**: Name the fasting period for Christians

OR: Name the fasting period for Muslims

39. **EITHER**: Which Angel brought the Good News about the birth of Jesus Christ?

OR: Which Angel who brought the Good News about the birth of Prophet Isa?

40. **EITHER**: State any **one** importance of Ten commandments to the Christians.

OR: State any **one** importance of Sheria laws to the Muslims.

SECTION B

Question 41 to 55 carry four marks each

41. (a) What are island states of Africa?

(b) Name the largest island in Africa

(c) Mention **two** examples of Island countries found in Atlantic Ocean in Africa

(i) _____

(ii) _____

42. (a) Write **TASO** in full.

(b) Give **two** ways in which **AIDS** has affected the industrial development in Uganda.

(i) _____

(ii) _____

(c) How has **AIDS** affected the population of Uganda?

43. (a) What are pack animals?

(b) Mention any **one** pack animal commonly kept in:

(i) Desert areas of Africa:

(ii) Mountainous areas of Uganda:

(c) How are pack animals useful to the traders in Africa today?

44. (a) Who succeeded the following kings in their kingdoms?

(i) Omukama Kabalega of Bunyoro

(ii) Kabaka Mwanga of Buganda

(b) Where was Kabaka Mwanga buried after his death?

(c) How was Kabaka Mwanga related to the death of Bishop Hannington?

45. (a) What is the main work of the bursar at school?

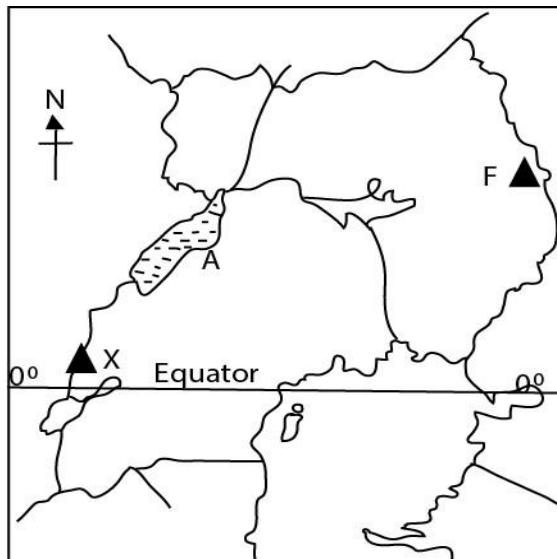
(b) State any **two** reasons why people work.

(i) _____

(ii) _____

(c) Mention any **one** problem faced by teachers during their work.

46. Study the map of Uganda below and use it to answer the questions that follow.



(a) Name the lake marked with letter **A**.

(b) By what process was mountain marked with letter **X** formed?

(c) What is the direction of mountain **X** from mountain **F**?

(d) Use letter D to show Victoria Nile.

47. (a) Who heads all the civil servants in the district?

(b) State the civic leaders who head the following departments in a district.


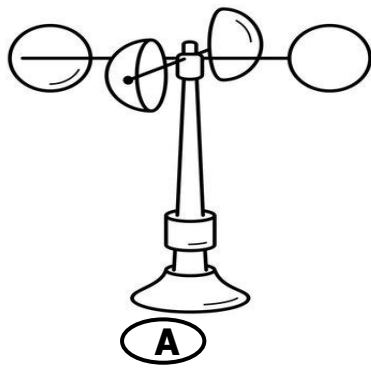
(i) Education

(ii) Animal health

48. (a) What is transport?

(b) Name the fastest type of transport used in East Africa.

49. (a) Name the wind instruments shown below.



(i) A: _____

(ii) B: _____

(b) What is the use of weather instrument marked with letter **B**?

(c) Which aspect of wind is measured by the instrument marked with letter A?

(c) Suggest **one** way how the East African government can improve on the:-

(i) Transport services:

(ii) Banking services:

50. (a) Name the Kingdom that replaced the Chwezi dynasty of Bunyoro-Kitara

(b) State any **two** economic contributions of the Chwezi to Uganda

(i) _____

(ii) _____

(c) Give any **one** reason why the Chwezi Empire collapsed

For each of the questions **51** to **55**, answer **EITHER** Christian **OR** Islamic questions but not **BOTH**.

51. **EITHER**: (a) Name any **two** miracles performed by Jesus Christ.

(i) _____

(ii) _____

(b) Give any **one** reason why Jesus performed miracles in His teaching.

(c) State **one** way in which Jesus' followers benefited from the miracles He performed.

OR: (a) Name the miracles prophet Muhammad P.B.U.H performed in the teaching

(b) Give any **one** reason why Prophet Muhammad's followers still benefit from miracles he Performed.

(d) Give any **one** reason why Prophet Muhammad performed miracles in His teaching.

52. **EITHER:** (a) Name the day that marks the beginning of fasting in Christianity

(b) Mention any **two** reasons why fasting is a good practice in Christianity

(i) _____

(ii) _____

(c) Give **one** thing a Christian can do during fasting to get blessings from God.

OR: (a) What marks the beginning of fasting in Islam?

(b) Mention any **two** reasons why fasting is a good practice in Islam.

(i) _____

(ii) _____

(c) Give **one** thing a Muslim can do during fasting to get rewards from Allah.

53. **EITHER:** (a) When do most Christians celebrate the birth of Jesus Christ?

(b) State any **three** things to show that Jesus Christ is the son of God.

(i) _____

(ii) _____

(ii) _____

OR: (a) When do Muslims celebrate the birth of Prophet Muhammad (P.B.U.H)?

(b) State any **three** things to show that Prophet Mohammad (P.B.U.H) was a true messenger of Allah.

(i) _____

(ii) _____

(iii) _____

54. **EITHER:** 'Don't hurt the boy or do anything to him' he said. 'Now I know what you honour and obey God, because you have not kept back your only son from Him;' (Gen 22:12)

(a) Who spoke the above words?

(b) Who was being talked to in the message?

(c) Mention the son who was to be sacrificed.

(d) Give any **one** lesson you as a Christian learn from the message above.

OR: ' I am offering you in sacrifice to Allah O my father! Do that commanded to you by Allah...' (37:102)

(a) Who was ordered to sacrifice according to the quotation above?

(b) Mention the son who was to be sacrificed.

(c) Give any **two** lessons you as a Muslim learn from the above quotation.

(i) _____

(ii) _____

55. **EITHER:** (a) what are talents?

(b) In which **two** ways can Christians benefit from their talents?

(i) _____

(ii) _____

(c) Mention any **one** effect of misusing talents by Christians.

OR: (a) What are talents?

(b) In which **two** ways can Muslims benefit from their talents?

(i) _____

(ii) _____

(c) Mention any **one** effect of misusing talents by Muslims.
