

# KOLFRAM EDUCATIONAL SERVICES KAMPALA



PRE REGISTRATION EXAMINATION SET **ONE** 2024

**PRIMARY SEVEN**

**SOCIAL STUDIES WITH RELIGIOUS EDUCATION**

*Time allowed: 2 hours 15 minutes*

**Index Number:**

EMIS Number						Personal Number		

**Candidate's Name:** .....

**Candidate's Signature:** .....

**School Name:** .....

**District Name:** .....

**DO NOT OPEN THIS BOOKLET UNLESS YOU ARE TOLD TO DO SO**

**Read and follow these instructions carefully:**

1. This paper has **two** sections: **A** and **B**. Section **A** has **40** questions and section **B** has **15** questions. The paper has **10** printed pages.
2. Answer **all** questions. **All** answers to both sections A and B must be shown in the spaces provided.
3. All answers **must** be written using a **blue** or **black** ball point pen or ink. Any answer written in pencils other than on graphs and diagrams will **not** be marked.
4. No calculators or **electronic** pens are allowed in the examination room.
5. Unnecessary **changes** in your work and handwriting that cannot be read easily may lead to **loss of marks**.
6. Do not fill anything in the table indicated: "**FOR EXAMINERS' USE ONLY**" and boxes inside the question paper.

FOR EXAMINER'S USE ONLY

QN. NO.	MARKS	EX'ER'S INITIAL
1 -10		
11 - 20		
21 - 30		
31 - 40		
41 - 43		
44 - 46		
47 - 49		
50 - 52		
53- 55		
<b>TOTAL</b>		

**Turn Over**

© 2024 KESK P7 MID FEBRUARY SOCIAL STUDES WITH R.E EXAMINATION

Trust Kolfram Educational Services for quality workbooks, companion books, PLE revision workbooks, PLE question Banks, Topical workbooks, Quality Assessments and Holiday packages

**SECTION A: 40 MARKS**

*(Questions 1 to 40 carry one mark each.)*

1. How are carpenters important in the school?

---

---

2. Give **one** reason why people are not allowed to settle in swamps.

---

---

3. Name the continent in which Uganda is located.

---


---

4. How are feeder roads important to farmers?

---

---

5. **Draw a map symbol of humps ahead in the space below.**



6. Mention any **one** economic contribution of missionaries in Uganda.

---

---

7. Name the physical feature that joins Red Sea to Mediterranean Sea.

---

---

8. How important is the grass planted in the school compound?

---

---

9. What is the use of a barometer at a weather station?

---


---

10. Give any **one** benefit of Suez canal to Egyptian government.

---

---

11. State any **one** indicator of the rotation of the earth.



---

---

12. Name the type of map scale given in the statement form.

---

---

13. Which department of police is responsible for controlling demonstrations which are violent?

---

---

14. Name the coastal country in East Africa crossed by the Equator.

---

---

15. Who named Uganda the pearl of Africa

---

---

16. State the difference between mountain ranges and mountain peak.

---

---

17. If it is 7:00 a.m. at Greenwich meridian what time is it at place y which is  $60^{\circ}\text{E}$  at the Greenwich meridian?

---

---

18. Why is it important to teach children their culture?

---

---

19. To which ethnic group do the Iteso belong?

---

---

20. How are voluntary leaders acquired?

---

---

21. State any **one** importance of vegetation to people.

---

---

22. Why is it important to treat boys and girls in a home equally?

---

---

23. Give **one** effect of spending money without a budget.

---

---

24. State any **one** disadvantage of an extended family.

---

---

25. Mention any **one** way children's rights are being abused in school today.

---

---

26. Name the weapon used for providing security at school below.



27. Mention any **one** cause of the Mau Mau rebellion in Kenya.

---

---

28. Give any **one** factor that has led to the increase in population in Kampala.

---

---

29. Why did missionaries introduce cash crops in Uganda?

---

---

30. State any **one** reason why Miombo woodland is sparsely populated.

---

---

31. Who formed the political party which led Uganda to self-rule?



---

---

32. How are people living in mountainous areas negatively affected?

---

---

33. Name the largest manmade lake in Africa.

---

---

34. Give **one** reason why the Portuguese were interested in the coast of East Africa.

---

---

35. How does the height of land affect the climate of an area?

---

---

**For questions 36 - 40, answer Either Christianity or Islamic question but not both.**

36. **Either:** Give **one** way Jesus Christ showed concern for the suffering.

---

---

**Or:** Give **one** way Prophet Muhammad (PBUH) showed concern for the suffering.

---

---

37. **Either:** How was Adam helpful after the completion of creation?

---

---

**Or:** How was Adam helpful after the completion of creation?

---

---

38. **Either:** Why is it good for every Christian to give an offertory?

---

---

**Or:** Why is it good for every Muslim to give Zakat?

---

---

39. **Either:** Give any **one** duty of the church in promoting peace and security.

---

---

**Or:** Give **one** duty of the Mosque in promoting peace and security.

---

---

40. **Either:** Why was King Herod unhappy with the birth of Jesus Christ?

---

---

**Or:** Why were the people of Mecca not happy with Prophet Muhammad?

---

---

**SECTION B ( 60 marks)**

*(Questions 41 to 55 carry four marks each.)*

41. State the reason why Africa is known as:

(a) The cradle land of man.

---

---

(b) The dark continent

---

---

(c) Which continent is not good for human settlement?

---

---

(d) State the reason for your answer mentioned above.

---

---

42. a) Name the country in the Horn of Africa which is affected by civil wars.

\_\_\_\_\_

\_\_\_\_\_

(b) How have wars affected the people Africa?

\_\_\_\_\_

\_\_\_\_\_

(c) In which **two** ways has the African Union helped countries affected by wars?

(i) \_\_\_\_\_

(ii) \_\_\_\_\_

43. (a) What are resources?

\_\_\_\_\_

\_\_\_\_\_

(b) Mention any **two** ways of conserving land.

(i) \_\_\_\_\_

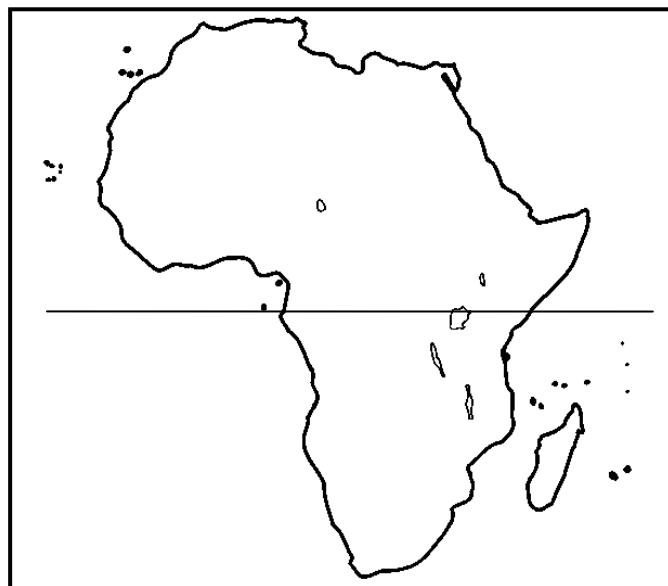
(ii) \_\_\_\_\_

(c) Give any **one** reason why some minerals have not been fully exploited in Uganda.

\_\_\_\_\_

\_\_\_\_\_

44. **Study the sketch map of Africa below and answer the questions that follow**



(a) Name the water body which separates Africa from Europe.

\_\_\_\_\_

\_\_\_\_\_

(b) Use letter **P** to show the first colony in Africa.

\_\_\_\_\_

\_\_\_\_\_

(c) Give **two** reasons why River marked with letter **N** carries the largest volume of water to the ocean.

(i) \_\_\_\_\_

(ii) \_\_\_\_\_

45. a) Why do Ugandans still remember major Kanuti Akorimo?

\_\_\_\_\_

(b) Who led Uganda to independence?

\_\_\_\_\_

(c) Mention **two** events that took place on 9th October 1962 at Kololo air strip.

(i) \_\_\_\_\_

(ii) \_\_\_\_\_

46. (a) Which nationalist led Tanganyika to independence?

\_\_\_\_\_

(b) What term was used to refer to Tanganyika after world war one?

\_\_\_\_\_

(c) Why did Tanganyika get independence earlier than Uganda and Kenya?

\_\_\_\_\_

(d) Mention the colonial power that granted Tanganyika independence.

\_\_\_\_\_

47. (a) Name the type of farming where a farmer grows crops and rears animals.

\_\_\_\_\_

(b) State any **two** advantages of the above mentioned type of farming.

(i) \_\_\_\_\_

(ii) \_\_\_\_\_

(c) Why is the above type of farming not commonly practised in East Africa?

\_\_\_\_\_

48. **Match List A with List B correctly.**

**A**

**B**

- |           |   |
|-----------|---|
| i) UBOS   | Protects and conserves the environment. |
| ii) UNRA  | Fights against smuggling of goods.      |
| iii) NEMA | Gives the population data.              |
| iv) SRPS  | constructs and repairs roads.           |

a) UBOS: \_\_\_\_\_

b) UNRA: \_\_\_\_\_

c) NEMA: \_\_\_\_\_

d) SRPS: \_\_\_\_\_

49. a) Give any **one** reason why Africans demanded for independence.

\_\_\_\_\_

(b) How did Africans demand for independence?

\_\_\_\_\_

(c) State any **two** problems faced during the struggle for independence.

(i) \_\_\_\_\_

(ii) \_\_\_\_\_

50. (a) What term is used to mean the catching of fish from water bodies?

\_\_\_\_\_

(b) State the work of the following people:

(i) A fisherman \_\_\_\_\_

(ii) A fish monger \_\_\_\_\_

(c) Name the biggest type of fish caught in our sub county?

\_\_\_\_\_

**For questions 51 to 54, answer Either Christianity or Islam but not both.**

51. **Either:**

(a) What is reconciliation?

\_\_\_\_\_

(b) State any **one** traditional way of reconciling with one another.

\_\_\_\_\_

(c) Give any **two** values of reconciliation to the Christians.

(i) \_\_\_\_\_

(ii) \_\_\_\_\_

**Or:** (a) What is reconciliation?

\_\_\_\_\_

(b) State any **one** traditional way of reconciling with one another.

\_\_\_\_\_

(c) Give any **two** values of reconciliation to the Muslims.

(i) \_\_\_\_\_

(ii) \_\_\_\_\_



52. **Either:**

**Complete the sentences in B by matching with words in list A below with list B.**

**A**

- i) Adam
- ii) Abel
- iii) Eve
- iv) Cain
- v) Noah

**B**

- The first person to kill.
- The first person to be killed.
- The first person to sin.
- The first person to hear and follow God's instruction.

---

---

---

---

---

**Or: Complete the sentences in B by matching with words in list A below with list B.**

**A**

- i) Adam
- ii) Habeel
- iii) Qabeel
- iv) Hawa
- v) Nuuh

**B**

- The first person to kill.
- The first person to be killed.
- The first person to sin.
- The first person to hear and follow Allah's instruction.

---

---

---

---

53. **Either: (a)** Who was sold to the Egyptians by his brothers?

---

---

(b) Which prophet was born in Egypt?

---

---

(c) What was the work of the above prophet in (b) before God called him?

---

---

(d) Give the meaning of **Exodus**.

---

---

**Or:** (a) Who was sold to the Egyptians by his brothers?

\_\_\_\_\_

(b) Which prophet was born in Misri?

\_\_\_\_\_

(c) What was the work of the above prophet in (b) before Allah called him?

\_\_\_\_\_

(d) Give the meaning of **Hegira**.

\_\_\_\_\_

54. **Either: (a)** What is sin?

\_\_\_\_\_

(b) State any **two** ways Christians commit sin.

(i) \_\_\_\_\_

(ii) \_\_\_\_\_

(c) What should a Christian do after sinning?

\_\_\_\_\_

**Or:** (a) What is sin?

\_\_\_\_\_

(b) State any **two** ways Muslims commit sin.

(i) \_\_\_\_\_

(ii) \_\_\_\_\_

(c) What should a Muslim do after sinning?

\_\_\_\_\_

55. **For Both:**

a) What are relationships?

\_\_\_\_\_

b) What type of relationship exists between a father and his biological children?

\_\_\_\_\_

c) Mention **two** ways we can have good relationship with others at school.

(i) \_\_\_\_\_

(ii) \_\_\_\_\_

