


# KOLFRAM EDUCATIONAL SERVICES KAMPALA

PRE REGISTRATION SET V EXAMINATION

2024

## SOCIAL STUDIES AND RELIGIOUS EDUCATION



THE KOLFRAM  
EXAMINATIONS BOARD

Time allowed: 2 hours 15 minutes

Index Number:

Random Number						Personal Number		

Candidate's Name: .....

Candidate's Signature: .....

School ID: .....

District ID: .....

**DO NOT OPEN THIS BOOKLET UNLESS YOU ARE TOLD TO DO SO**

Read and follow these instructions carefully:

1. Do not write your **school** or **district name** anywhere on this paper.
2. This paper has **two** sections: **A** and **B**. Section **A** has **40** questions and section **B** has **15** questions. The paper has **10** printed pages.
3. Answer **all** questions. **All** answers to both sections A and B must be shown in the spaces provided.
4. All answers **must** be written using a **blue** or **black** ball point pen or ink. Any answer written in pencils other than on graphs and diagrams will **not** be marked.
5. No calculators or **electronic** pens are allowed in the examination room.
6. Unnecessary **changes** in your work and handwriting that cannot be read easily may lead to **loss of marks**.
7. Do not fill anything in the table indicated: "**FOR EXAMINERS' USE ONLY**" and boxes inside the question paper.

**FOR EXAMINER'S USE ONLY**

QN. NUMBER	MARKS	EXAMINER'S INITIAL
1 - 10		
11 - 20		
21 - 30		
31 - 40		
41 - 43		
44 - 46		
47 - 49		
50 - 52		
53 - 55		
<b>TOTAL</b>		

**SECTION A: 40 MARKS**

*(Questions 1 to 40 carry one mark each.)*

1. State any **one** element of a good map.

.....  
.....

2. On which river are Victoria Falls located?

.....  
.....

3. Mention any **one** cause of domestic violence in the community?

.....  
.....

4. Name the newest country to join East African Community.

.....  
.....

5. State any **one** way in which games and sports are important in a community.

.....  
.....

6. Which Ministry is directly responsible for Primary Schools in Uganda?

.....  
.....

7. Why are suspects taken to the courts before they are imprisoned?

.....  
.....

8. Write SACCOs in full.

.....  
.....

9. How are polythene bags / papers a danger to our environment?

.....  
.....

10. What type of trade replaced barter trade?

.....  
.....



11. How is Uganda trying to promote peace in its neighbouring countries?

.....  
.....

12. How does the government of Uganda gain from foreign investors?

.....  
.....

13. Which was the first European Country to get a colony in Africa?

.....  
.....

14. Why was Mt. Rwenzori referred to as the "Mountains of the moon"?

.....  
.....

15. Suggest any **one** way the government of Uganda can improve on its labour force.

.....  
.....

16. Give any **one** reason why the colonial government introduced taxes.

.....  
.....

17. Identify any **one** role played by traders in the development of Uganda.

.....  
.....

18. Give any **one** danger of land fragmentation.

.....  
.....

19. How did L. Victoria contribute to the rise and expansion of Buganda Kingdom?

.....  
.....

20. Why do people in desert and Semi desert areas leave a nomadic way of life?

.....  
.....

21. How did Uganda become a member of the East African Community?



.....  
.....

22. How did Slave trade affect food production in East Africa?

.....  
.....

23. State **one** importance of having one local language in East Africa.

.....  
.....

24. Mention any **one** way through which poverty can be eradicated in our community.

.....  
.....

25. How is a Post office useful to a community?

.....  
.....

26. How did Captain F.D Lugard solve the problem of religious wars in Uganda?

.....  
.....

**Below is a diagram of a Uganda emblem. Use it to answer question that follow.**



27. Why is the crested crane standing on one leg?

.....  
.....

28. Name any **one** man-made cause of environmental degradation.

.....  
.....

**Below is a diagram of royal regalia. Use it to answer question 29.**




29. How was royal regalia above important to the people of pre-colonial Uganda?

.....  
.....

30. Give any **one** way in which climate influences economic activities.

.....  
.....

31. Name the least common type of transport used in Uganda.



.....  
.....

32. State **one** factor that led to the building of a factory at Hima.

.....  
.....

33. Why is the government of Uganda encouraging people to grow non-traditional cash crops?

.....  
.....

34. Why is the equatorial Climate described as hot and wet?

.....  
.....

35. Why is a sign post important to a school?

.....  
.....

For each of the questions 36 to 40, answer **EITHER** the Christian **OR** Islamic question but not both. No marks will be awarded to a candidate who attempts both alternatives in the same number.

36. **Either:** Why did the three wise men give gifts to baby Jesus?

.....  
.....

**Or:** Why did early Muslims face Jerusalem while praying?

.....  
.....

37. **Either:** Why do Christians work?

.....  
.....

**Or:** Why do Muslims work?

.....  
.....

38. **Either:** Why do Christians take the Bible to be a holy book?

.....  
.....

**Or:** Why do Muslims take the Quran to be a holy book?

.....  
.....

39. **Either:** Who was the first disciple to be called by Jesus?

.....  
.....

**Or:** Who was the first person to convert to Islam

.....  
.....

40. **Either:** Who was the last prophet according to the Bible?

.....  
.....

**Or:** Who was the last Prophet according to the Quran?

.....  
.....



**SECTION B (40 MARKS)**

41. a) What title is given to the highest elected leader in a district local council?

.....  
b) Identify any **two** duties of Local Councils.

i).....

ii).....

c) Give any **one** duty of a sub-county Chief.

42. a) How is Uganda's fish for export preserved?

b) How did fish poisoning affect Uganda's fish exports?

c) Give any **two** problems that fish face in Uganda's lakes.

i).....

ii).....

43. a) State the difference between internal trade and bilateral trade.

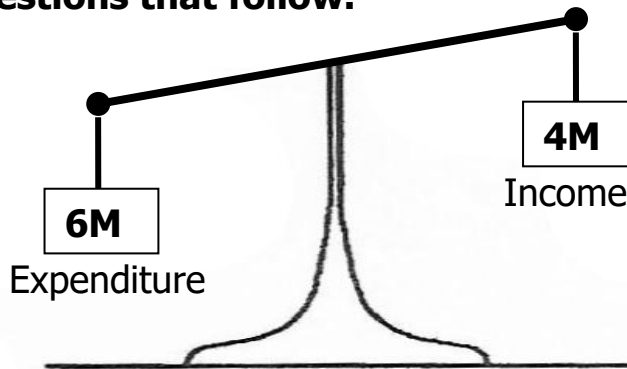
b) Give any **two** problems facing traders in Uganda.

i).....

ii).....

c) How has the government of Uganda tried to solve any of the named problems (in 43.b)

44. **Below is the type of a budget made by Mr Okello annually. Use it to answer questions that follow.**



a) Name the type of budget shown above.

b) Give **one** disadvantage of the above type of budget.

c) State any **one** cause of the type of budget shown above.

d) Why is it important for families to prepare budget?

45. a) Name the agreement which introduced hut and gun tax.

.....  
.....

b) Which group of people were supposed to pay each of these taxes?

i) Hut tax

.....

ii) Gun tax.

.....

c) How did the Agreement named in (a) above affect Toro Kingdom?

.....

.....

46. a) Which National game park in Uganda is famous for zebras?

.....

.....

b) Identify **two** problems faced by people living near National Game Parks.

i).....

ii).....

c) How can tourism be a disadvantage to a country's security?

.....

47. Sudan is **one** country in Africa that largely depends on irrigation farming.

a) State any **two** advantages of growing crops by irrigation.

i).....

ii).....

b) Mention any **two** problems faced by farmers on the Gezira Irrigation Scheme.

i).....

ii).....

48. (a) What is corruption?

.....

.....

(b) In which way is cronyism different from nepotism?

.....

.....

(b) State any **one** cause of corruption in Uganda today.

.....

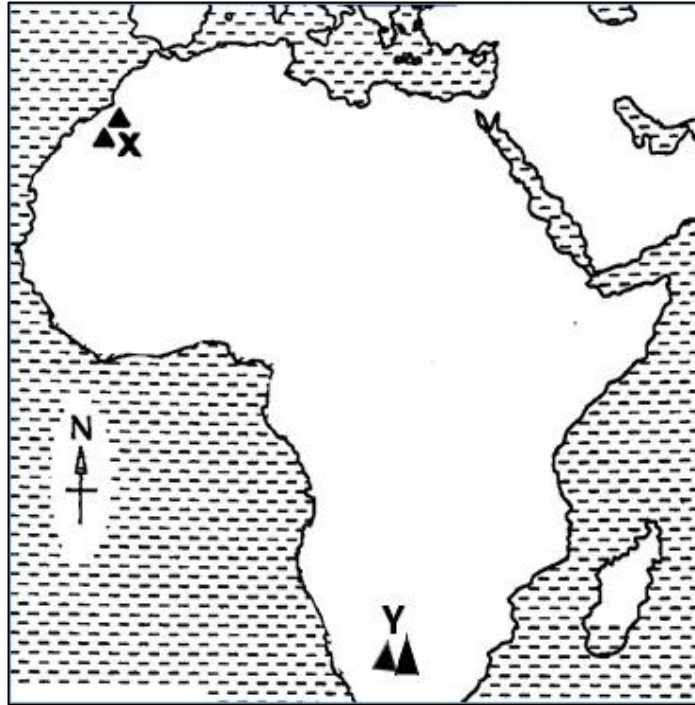
.....

(d) Mention any **one** way in which the government of Uganda is fighting against corruption.

.....

.....

**49. Use the sketch map of Africa below to answer the questions that follow.**



(a) Name the mountain marked with the letter **X** and **Y**:

(i) **X**: .....

(ii) **Y**: .....

(b) Why was Suez Canal built by the British?

.....  
 .....

(c) Use letter **M** to indicate Red Sea on the map above.

.....  
 .....

50. a) How did Rwanda join the Commonwealth yet it was not colonized by Britain?

.....  
 .....

b) Why were each of these countries at one time suspended from the Commonwealth?

i) South Africa:

.....  
 .....

ii) Nigeria:

.....  
 .....

c) How does Uganda benefit from the activities of the Commonwealth?

.....  
 .....



For each of the questions 51 to 55, answer **EITHER** the Christian **OR** the Islamic questions, but not both. No marks will be awarded to a candidate who attempts both alternatives in a particular number.

51. a) **Either:** a) What is the first sacrament according to Christianity?

.....  
.....

b) Mention the symbol for the mentioned Sacrament (in 51. a)

.....  
.....

c) State two benefits of the sacrament mentioned in (51. a)

i).....

ii).....

**Or:** What is the second pillar in Islam?

.....  
.....

b) Give any **two** ways Muslim believers benefit from this pillar.

i).....

ii).....

c) How do believers prepare for this pillar?

.....  
.....

52. **EITHER:**

(a) What are sexual deviations?

.....  
.....

(b) Give any **two** examples of sexual deviations practiced by Christians.

(i) .....

(ii).....

(c) State any **one** way sexual deviations are bad.

.....  
.....

**OR:**

(a) What are sexual deviations?



.....  
.....

(b) Give any **two** examples of sexual deviations practiced by Muslims.

(i) .....

(ii).....

(c) State any **one** way sexual deviations are bad.

.....  
.....

53. **Either:** a) Why did God give Commandments to the Israelites?

.....  
.....

b) Mention **two** greatest commandments of God as taught by Jesus Christ.

- i).....
- ii).....

c) What was the last commandment that Jesus gave to his disciples?

- .....
- .....

**Or:** a) Give any **two** ways a Muslim should keep the Qur'an.

- i).....
- ii).....

b) Mention any **two** kinds of people who should not touch the Qur'an.

- i).....
- ii).....

54. **Either:** a) Who led the Israelites across River Jordan?

- .....
- b) Why was it necessary for Moses to rescue the Israelites?

- .....
- c) Why were the Israelites' baby boys being killed by the authorities in Egypt?

- .....
- d) Where in Egypt were the Israelites staying?

- .....
- Or:** Who led the Israelites across the Red Sea?

- .....
- b) Why was it necessary for Musa to rescue the Israelites?

- .....
- c) Why were the Israelites' baby boys being killed by the authorities in Egypt?

- .....
- d) Where in Egypt were the Israelites staying?

- .....
- 55. **FOR BOTH:**

- (a) State any **two** qualities of a good marriage partner.

- i).....
- ii).....

- (b) Give any **one** reason why people marry.

- .....
- (c) Mention **one** common marriage problem among Christians and Muslims.

- .....
- .....

