

END OF YEAR MATH EXAM

PRIMARY FOUR

NAME : _____

1. Subtract $23 - 5$

2. Simplify $x + 2y + 4x + y$

3. Given that set $P = \{2, 4, 6, 8, 10, 12\}$ and set $R = \{1, 2, 3, 4, 5, 6, 7, 8\}$

Find $P \cap R$

4. Given that  represents 12 balls, how many balls are represented below    

5. Find the value of N : $6 + n = 19$

6. Round off 4756 to nearest thousands

7. Work out $\frac{2}{3} + \frac{1}{3}$

8. Multiply $1\ 2\ 3$

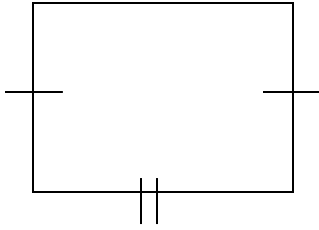
$$\begin{array}{r} x \quad \quad \quad x \quad 5 \\ \hline \\ \hline \end{array}$$

8. OKello bought a bag at sh.12000 and sold it at sh. 8000 what was her loss?

9. Work out the GCF OF 10 and 5

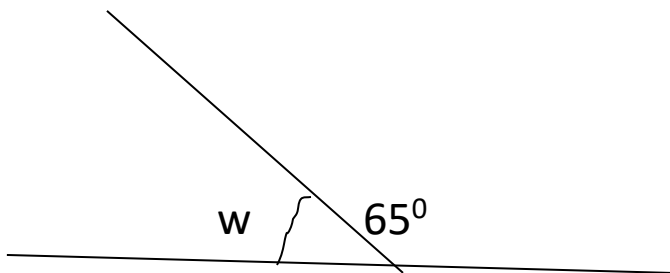
11. Find the area of the figure below.

||



12. Birungi bought 1500 millilitres of milk from a dairy shop. How many litres of milk did she buy?

13. Find the size of angle w in the figure below



14. Robert picked thirty eight mangoes from a mango tree. Write the mangoes he picked in Roman Numerals

15 Find the L.C.M of 5 and 7

16. Halima did four tests and scored the following marks 3, 7, 4, and 6 what was her average score.

Download more pastpapers from www.nutoonline.com

17. List the first five even numbers

18. What is the last month of the year?

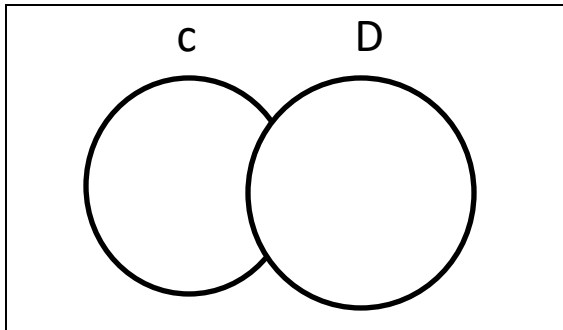
19. Add	Hrs	min
	6	35
	7	46
	<hr/>	

20. How many days are in 48 hours?

Section B

Give that set $c = \{3, 6, 9, 12\}$ set $D = \{4, 8, 12, 16, 18\}$

Represents the information on the Venn diagram



(ii) What is $(C \cap D)$?

(ii) Find $n(C \cup D)$

22. Work out the following

Hrs

min

(b) week

days

2

25

4

6

1

35

1

4

(c) m

cm

Download more pastpapers from www.nutoonline.com

$$\begin{array}{r}
 5 \quad 30 \\
 + 4 \quad 20 \\
 \hline
 \end{array}$$

23. John got shs. 15000 from his uncle. He used $\frac{2}{5}$ of the money to buy a radio and gave the rest to his mother

(a) What fraction did John keep?

(b) How much money did he spend on a radio?

(c) Work out $2\frac{1}{4} + 3\frac{1}{4}$

24. What is the time indicated on the clock face below.





(b) Write a quart past two o'clock in figures

25. What name is given to the following figure?

(i) A five sided figure

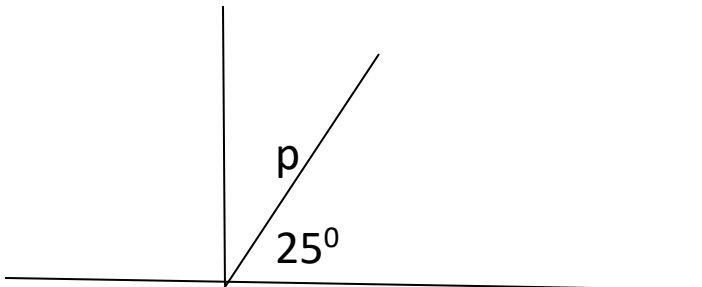
(ii) A four sided figure with two opposite side equal

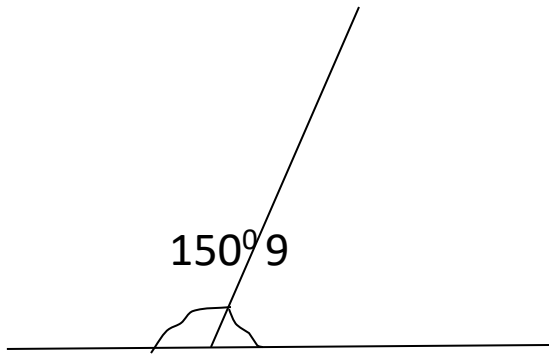
(b) Draw the following shapes

(i) A cone

(ii). A circle

26. Find the size of the missing angles below





27. Complete correctly

Week	_____	2	3	_____	5	_____	7
Days	7	14	_____	28	_____	42	_____

Solve for the unknown